

Thursday 7th April 2022



to Y2 Remote Learning

Literacy



Thursday 7th April 2022

I can write a story

Today you are going to write your story.

Look back at your story plan to remember
your setting, characters and prop.

Can you remember the beginning, middle
and end of your story?

Which time connectives did you use?

Thursday 7th April 2022

I can write a story

Write your story in four parts.

Passage 1 - Character description

Passage 2 - Setting description

Passage 3 - Explain the problem

Passage 4 - Solution to the problem

Make sure that you include:

A50 - Noun phrases

A44 A51 - connectives

and, but, because, when, if, that, or,

A52 - Questions and exclamations

What a! Did you know?

A53 - Joined up handwriting


A39 - Different sentence starters.

A45 - Verbs and adverbs

A57 - Interesting adjectives



MATHS



7 . 0 4 . 2 2

I can answer questions on statistics.

Think about all of the things that you have learnt about data.

Can you remember how to draw a tally chart?

How can you put this information into a pictogram?

How do you draw a block graph?

Can you answer questions about the data?

Year 2

Statistics

Name _____

- 1 Rosie draws a tally chart for the hair colour of the children in her class.

Hair colour	Tally	Number
Brown		
Blonde		
Black		6
Ginger		2

How many children have brown hair?

_____ children

☐

1 mark

Complete the tally for children with blonde hair.

☐

1 mark

How many children are in Rosie's class?

_____ children

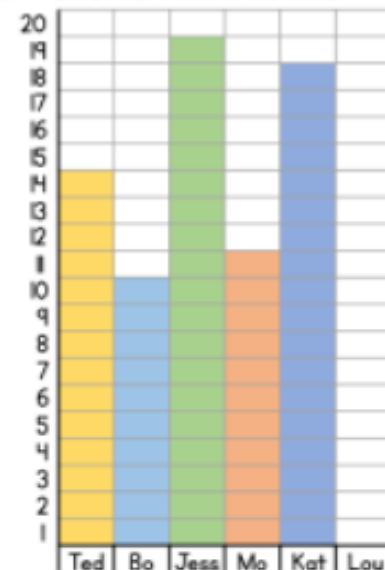
☐

1 mark

2

The children in class 2 have a competition. They count how many balls go through a hoop in 1 minute.

The diagram shows the results.



Who gets the most balls through the hoop?

☐

1 mark

How many more balls does Kat get through the hoop than Mo?

☐

1 mark

Lou gets 5 balls through the hoop.


Show this information on the block diagram.

☐

1 mark

- 3 The pictogram shows how much money 4 children have in their money box.

Child	Money
Teddy	    
Jack	   
Eva	 
Dora	      

Each  represents £5

How much money does Jack have?

£

1 mark

How much more money does Dora have than Eva?

£










1 mark


If Teddy spends £5, how much money does he have left?

£

1 mark

- 4 The pictogram shows how many eggs some chickens lay each day.

Day	Number of eggs
Monday	  
Tuesday	   
Wednesday	 
Thursday	
Friday	

Each  represents 2 eggs.

How many eggs were laid on Wednesday?

eggs

1 mark

On Thursday, the chickens lay 4 eggs.

On Friday, the chickens lay one more egg than they do on Thursday.

Complete the pictogram.

2 marks

Circle how confident you feel with statistics.

1

2

3

4

5

Not
confident

Very
confident

Handwriting



Handwriting

Thursday 7th April 2022

g

giggle

egg

bigger

Theme



7.04.22

I can recognise the key features of a village, town and city.

What is the difference between a village, town and city?

Let's recap.

Use the like below



<https://www.slideshare.net/logonzlez/city-town-village1>

7.04.22

I can recognise the key features of a village, town and city.

What would you expect to find in each place?

Village

Town

City

