

Thursday 31th March 2022

Ask an adult to test you on these spellings or practice them by yourself by covering them.

queue
recognise
recommend
relevant
restaurant
rhyme
rhythm
sacrifice
secretary
shoulder
signature
sincere(ly)

I can write a letter from the perspective of the wolves.

Today, your task is to write a letter as if you were a wolf who had just joined the wolf pack who are living in the walls in Lucy's house.

The letter is to the alpha wolf of the pack that you used to belong.

You are writing to explain the problems that your new wolf pack are facing and you're asking for help about how to solve them.

I can write a letter from the perspective of the wolves.

How could we start?

Dear Alpha Wolf Barney,

It seems like such a long time since I left your pack to find a mate and rear my own cubs of my own; back then, I was full of excitement and bright dreams of the future. However, things haven't gone as well as I might have hoped - I have found myself stuck with an ill-tempered new alpha and very little food! Old friend, I need your advice!

Does this sound formal or informal?


First of all, food is scarce, here, between the walls. Sometimes, we go without food for several days; it breaks my heart to see the pups - who stare at me with those puppy-dog eyes - whimpering with hunger. Scrabbling around for rats (skinny, bony, evil, little things) is no way for a proud wolf to live. Furthermore, we then have to share HALF of what we get with that fat, lazy, lump of an alpha wolf, Clive! I have started to wonder if I should try and gobble up one of those juicy humans: what do *you* think?

Flashback 4

Flashback 4

Year 5 | Week 11 | Day 4

1) What percentage is shaded?



2) Write $2\frac{7}{1000}$ as a decimal

3) Work out $3\frac{1}{2} + 4\frac{3}{5}$

4) Which angle is an obtuse angle?

37°

137°

237°

337°

31.03.22

I can understand thousandths as decimals

<https://vimeo.com/519979817>

Understand thousandths

White
Rose
Maths



- 1 Tommy is using base 10 to represent decimals.

He uses  to represent 1 whole.

He uses  to represent $\frac{1}{10}$ or 0.1

He uses  to represent $\frac{1}{100}$ or 0.01

He uses  to represent $\frac{1}{1000}$ or 0.001

What decimals are represented?

a) 

b) 

c) 

- 2 a) Represent each number using base 10
0.512 1.352 2.003

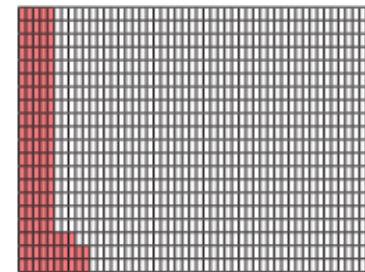
b) Use your representations to help you complete the statements.

$0.512 = 0.5 + 0.01 +$

$1.352 = 1 +$ $+$ $+$

$2.003 =$ _____

- 3 Here is a thousand square.
Part of the square has been coloured.



a) Why do you think it is called a thousand square?

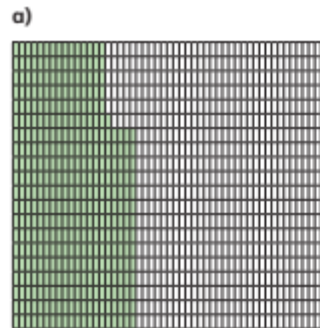
b) What fraction of the square has been coloured?

1000

c) Write the fraction as a decimal.

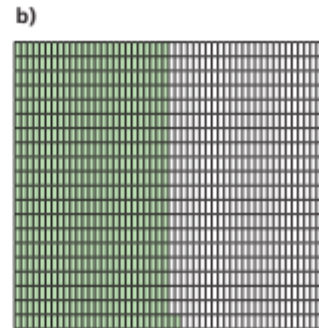
- 4 What fraction of each square has been shaded?

Write each number as a fraction and as a decimal.



fraction =

decimal =




fraction =


decimal =

- 5 Colour the grids to represent the fraction and decimal.

a) $\frac{73}{1000}$




b) 0.302



- 6 Represent these numbers on a place value chart.

a) 1.372 b) 0.091 c) 3.542

- 7 Show that $\frac{400}{1000}$ is the same as 0.4



- 8 Write the numbers represented by the place value charts.

a)

Ones	Tenths	Hundredths	Thousandths
1 1 1 1	0.1 0.1	0.01 0.01 0.01 0.01 0.01 0.01 0.01	0.001 0.001 0.001 0.001 0.001 0.001

b)

Ones	Tenths	Hundredths	Thousandths
	0.1 0.1 0.1 0.1 0.1		0.001 0.001 0.001 0.001



RE

I can explain how a piece of art can be an expression of worship in Buddhism.

What do you know about Buddhism? 

Let's take a look at pieces of art inspired by Buddhism. 

I can explain how a piece of art can be an expression of worship in Buddhism.

Your task...

Using what we've discussed and observed, your task is to create a piece of art work.

What key ideas from Buddhism will you base your art work around?

