

Thursday 24th March 2022



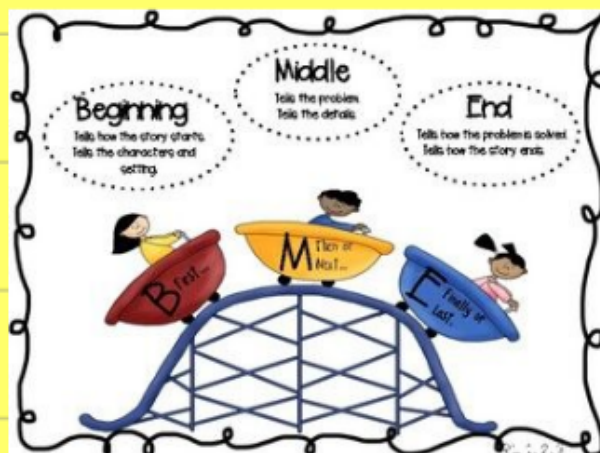
to Year 2 Remote Learning

Thursday 24th March 2022

I can write a story. A40 A48 A62

Look at your story plan from yesterday.

Tell your partner what will happen in your story.



Thursday 24th March 2022

I can write a story. A40 A48 A62

Beginning

time connective phrases
adjectives (noun phrases)

connectives
suffix words

What time connective will you start with? What happens in the beginning?

Thursday 24th March 2022

I can write a story.

A40 A48 A62

time connective phrases
adjectives (noun phrases)

connectives
suffix words

question
exclamation

Middle

What time connectives can you use?
What happens in the middle?

Thursday 24th March 2022

I can write a story.

A40 A48 A62

time connective phrases

connectives

adjectives (noun phrases)

suffix words

End

What time connectives can you use?
What happens at the end? Is the
problem resolved?

Thursday 24th March 2022

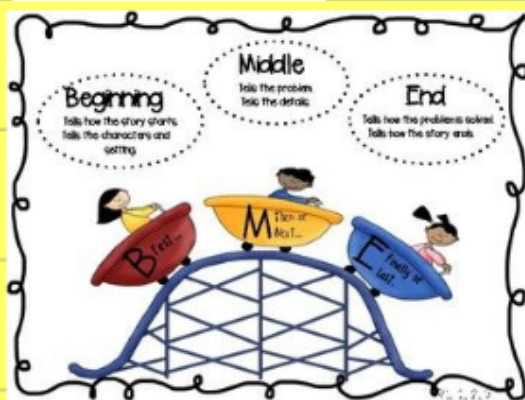
I can write a story. A40 A48 A62



Use your plan to help you write a story about your Robot.

Remember your story must have a beginning, middle and end.

You should include: Suffix words Time connectives




Different sentence starters

Different sentence types

Neat, joined handwriting

Conjunctions - or, if, when, but, because, that



A



ay

Today I played football with my friends.



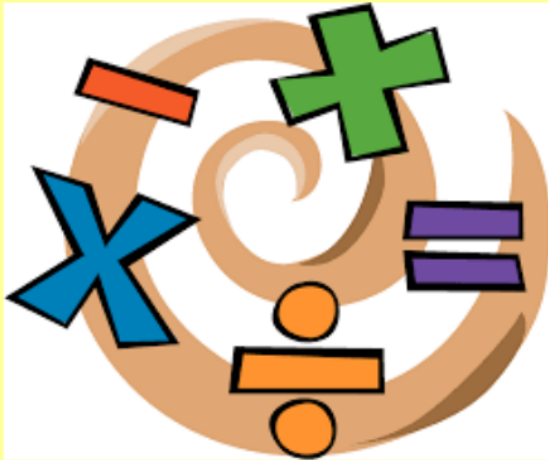
Wow!



and

Maths

10:45 – 11:45



2 4 . 3 . 2 2

MATHS

10:45 - 11:45



I can solve time word problems.

A 5 8 A 4 6

Match each time to the time shown on the clock.

What is a
word
problem?




How can
we solve
them?



9 o'clock



half past 12



half past 9



6 o'clock



word problem

duration

o'clock

half past

quarter past

quarter to

___ past ___

___ to ___

2 4 . 3 . 2 2

MATHS

10:45 - 11:45



I can solve time word problems.

A 5 8 A 4 6

Order the times from shortest to longest.

1 hour

half an hour

5 minutes

42 minutes

shortest

longest



word problem

duration

o'clock

half past

quarter past

quarter to

___ past ___

___ to ___

2 4 . 3 . 2 2

MATHS

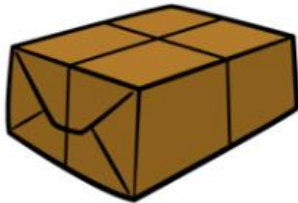
10:45 - 11:45



I can solve time word problems.

A 5 8 A 4 6

A machine fills one box every minute.
How many boxes does it fill in one hour?



_____ boxes



word problem

duration

o'clock

half past

quarter past

quarter to

___ past ___

___ to ___

2 4 . 3 . 2 2

MATHS

10:45 - 11:45



I can solve time word problems.

A 5 8 A 4 6



Write the
time shown
on the clock.

Can you count
in 5s to help?



word problem

duration

o'clock

half past

quarter past

quarter to

___ past ___

___ to ___

2 4 . 3 . 2 2

MATHS

10:45 - 11:45



I can solve time word problems.

A 5 8 A 4 6

Jane sets off to school at 7 o'clock.

She arrives at school at 25 minutes to 8

How long was Jane's journey?

_____ minutes



word problem

duration

o'clock

half past

quarter past

quarter to

___ past ___

___ to ___

24.3.22

MATHS

10:45 - 11:45



I can solve time word problems.
A 5 8 A 4 6

Tick the clock face that shows twenty past six.



word problem

duration

o'clock

half past

quarter past

quarter to

___ past ___

___ to ___

2 4 . 3 . 2 2

Your turn

MATHS

10:45 - 11:45

I can solve time word problems.

A 5 8 A 4 6



Read the questions carefully.

Think about what it is asking you to do by circling key words/numbers.

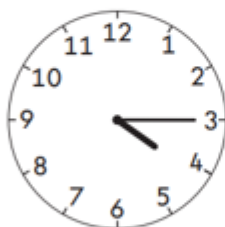
Work out and **CHECK** your answers.

1.

Match each clock to the time it shows.



twenty-five past four



quarter to four



quarter past four

2.

Circle the longer time interval.

1 hour

65 minutes

3.

Kemi goes to four clubs each week.

Which club lasts the **longest**?

Circle it.

Swimming

45 minutes

Art

2 hours

Music

75 minutes

Drama

1 hour

4.

Draw hands on this clock to show the time half past two.



5.

O



What time does the clock show?

Tick the correct box.

twenty to 6

half past 9

half past 8

quarter to 6

6.

Circle the **shortest** time.

70 minutes

10 minutes

45 minutes

1 hour

7.

Tick the clock face that shows **ten past twelve**.



8.

Ravi and Jade run around the school playground. The time it takes is recorded on a stopwatch. Here are the times:



Ravi

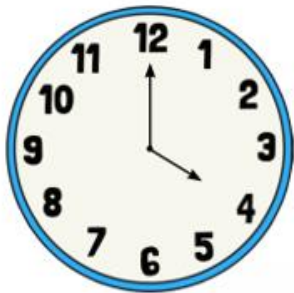


Jade

Who ran round the playground quicker?

9.

Dan will have his tea in 1 hour's time. What time will that be?



10.



a) 7 o'clock



b) twenty five to 3

What time do the following clocks show?



c)



d)

11.

Write the time shown on each clock.

Use these words to help you.

quarter past

quarter to







12.

a) How many minutes in one hour?

b) How many minutes in two hours?

c) How many hours in 2 days?

Handwriting

Thursday 24th March 2022

W

wl

wR

wR

THEME
2:00 - 3:00



24.3.22

I know who Winston Churchill was.



Click on the link
to watch a video
about Winston
Churchill?

Why was he a significant person?



24.3.22



I know who Winston Churchill was.

Draw a picture and write sentences explaining who Winston Churchill was and why he was a significant person.



and
but
because
or
if
that
when

Prime Minister
Great Britain
World War 2
leader
famous
1940
soldiers
speeches