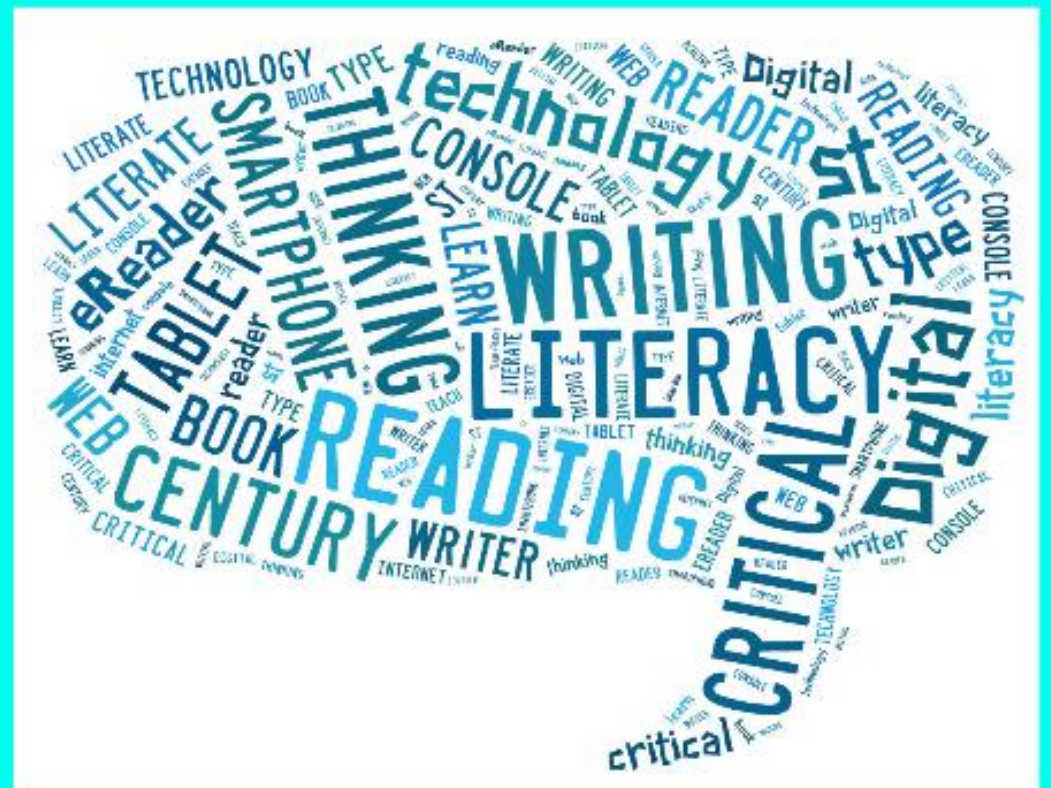


Wednesday 23rd March 2022



to Y2 Remote Learning

Literacy



Wednesday 23rd March 2022.

I can plan my story

What are we learning today?

Today we will plan our stories about the characters that we designed yesterday. We should be thinking about the structure and order of events.

Mon Ami le Robot

<https://www.literacyshed.com/mon-ami-le-robot.html>



Wednesday 23rd March 2022.

I can plan my story

Think about : -

Who is your character?

What are they like?

What part of them needs replacing?



Wednesday 23rd March 2022.

I can plan my story



Where does your story take place?

What will happen to your character when they run out?

Where do they go for help?

What happens at the end?



Wednesday 23rd March 2022.

I can plan my story.

Write notes in each part of the planner to help you to write the story tomorrow.

Beginning

Who are the characters?

Where is the setting?

What happens?

Wednesday 23rd March 2022.

I can plan my story.

Middle

What is the problem?

Where do they go for help?

Wednesday 23rd March 2022.

I can plan my story.

End

How is the problem solved?

How does the story end?


Wednesday 23rd March 2022.

I can plan my story.

What have you learnt today?

Share a part of your story.

MATHS



2 3 . 0 3 . 2 2

I can compare durations of time.

Let's recap

What does duration mean?

The amount of time
taken to do something

2 3 . 0 3 . 2 2

I can compare durations of time.

Use the greater than and less than symbols
to compare these different amounts of time.

$>$ $=$ $<$

1 hour

65 minutes

24 hours

2 days

Quarter of an hour

30 minutes

90 minutes

One and a half hours

2 3 . 0 3 . 2 2

I can compare durations of time.

Put these periods of time in order.
Smallest first.

week

day

year

minute

hour

second

month

2 3 . 0 3 . 2 2

I can compare durations of time.

Order these activities.

I have my tea at half past 5

I start school at 9 o'clock

I get up at half past 7

I finish school at quarter past 3

Play time is at half past 10

I go to bed at 7 o'clock

I watch TV at 4 o'clock

Dinner time is 12 o'clock

2 3 . 0 3 . 2 2

I can compare durations of time.

Match the clocks to the activities.

I get up at half past 7

I start school at 9 o'clock

Play time is at half past 10

Dinner time is 12 o'clock

I finish school at quarter past 3

I watch TV at 4 o'clock

I have my tea at half past 5

I go to bed at 7 0'clock



2 3 . 0 3 . 2 2

I can compare durations of time.

Use the link below to find out more.

<https://vimeo.com/552288187>



Complete the questions on the next pages

Compare durations of time

- 1 Write $<$, $>$ or $=$ to compare the durations of time.

a) 50 minutes 1 hour

b) quarter of an hour 15 minutes

c) half an hour 25 minutes

- 2 Write the times in order from shortest to longest.

90 minutes

one hour

45 minutes

shortest _____

longest _____

- 3 Circle all the durations of time that are longer than half an hour.

35 minutes



three-quarters of an hour


- 4 Circle all the durations of time that are shorter than half an hour.

25 minutes



three-quarters of an hour

- 5 The clocks show the times that Ron and Teddy started and finished tidying their rooms.



Who tidied their room in the shortest amount of time? _____
How did you work this out?

- 6 Aisha and Kim both started their homework at 6 o'clock.



Aisha finished her homework at 25 past 6
Kim's homework took her 10 minutes longer.
What time did Kim finish her homework?

- 7 The children in Class 2 ran around the edge of the school field.

The table shows their start and finish times.

Name	Start time	Finish time
Tommy	10 past 2	half past 2
Amir	quarter past 2	half past 2
Dora	20 past 2	quarter to 3
Rosie	20 past 2	20 to 3

Use the information in the table to complete the sentences.

- a) _____ took the longest time.
b) _____ took the shortest time.
c) Tommy ran faster than _____.
d)



Tommy

Amir and I
took the same length
of time because we
finished together.

Is Tommy correct? _____
How do you know?

2 3 . 0 3 . 2 2

I can compare durations of time.

True or False ?

Compare durations of time



Blue Peter is on for 5 minutes longer than Newsround.

TV show	Starts	Ends
Newsround	5 o'clock	Half past 5
Rower Rangers	Quarter past 5	Twenty to 6
Blue Peter	Quarter to 6	Quarter past 6

Handwriting



Handwriting

Wednesday 23rd March 2020

w

l

wl

wl

Different Beliefs



23.03.22

I understand what Lent means.

Lent is the period of six weeks (40 days not including Sundays) leading up to **Easter**, the most important festival in the Christian calendar.

Lent starts on **Ash Wednesday**. The last week of Lent is called **Holy Week**.

Let's find out more.

<https://www.bbc.co.uk/bitesize/topics/ztkxp4/articles/z77jf4j>



23.03.22

I understand what Lent means.

What three things do Christians do in Lent?

-
-
-

How can people remember what God sacrificed?

-
-
-
-

23.03.22

I understand what Lent means.

What could you give up for Lent?

