

Friday 11th March 2022



possible

recent

purpose

Greedy, I guzzled down a double cheeseburger and fries.

WOTD


guzzled

Can you write your own sentence using the word of the day and spelling words?

Friday 11th March 2022

I can create a glossary

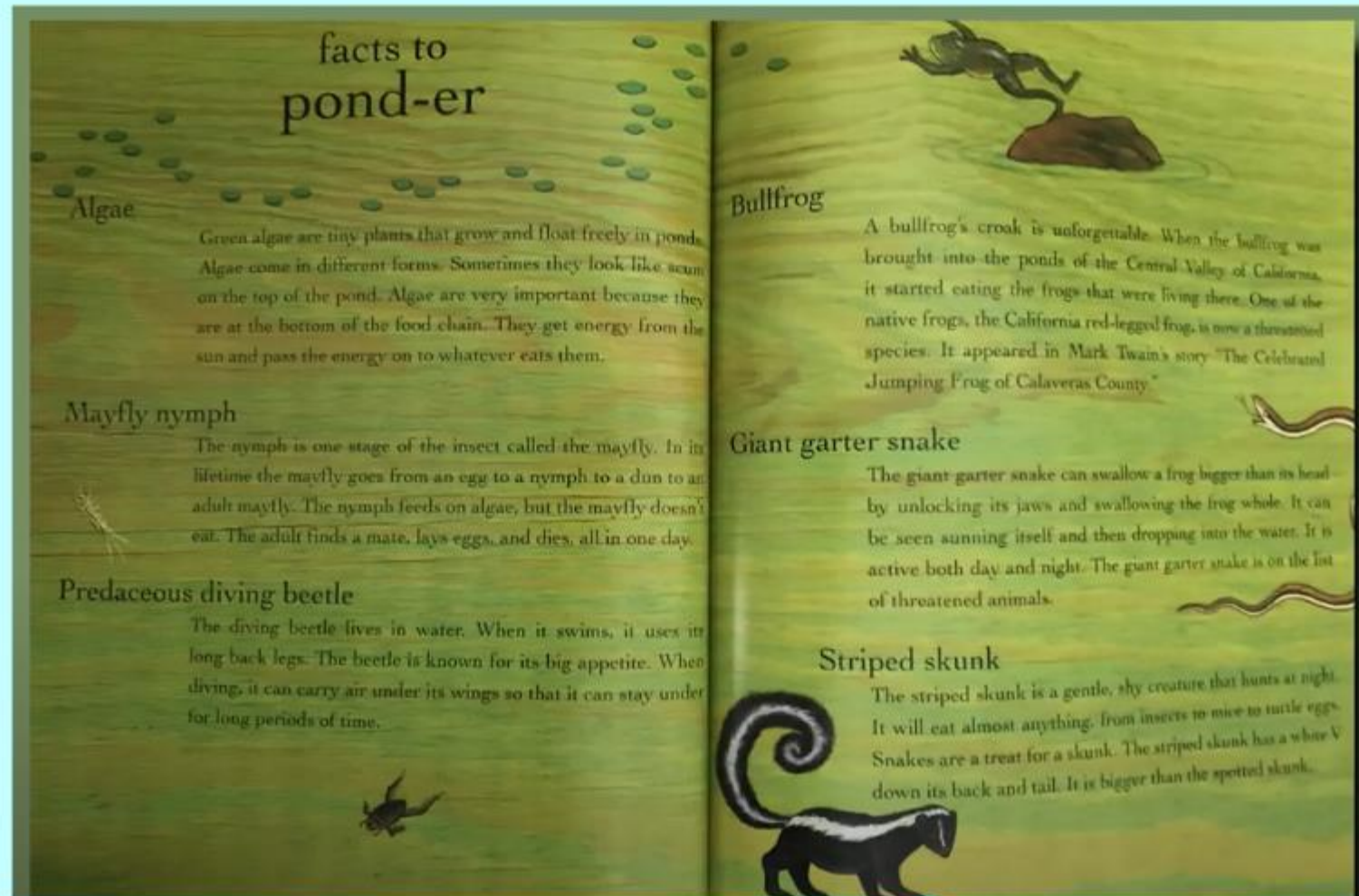
Let's explore the last few pages of the book



Friday 11th March 2022

I can create a glossary

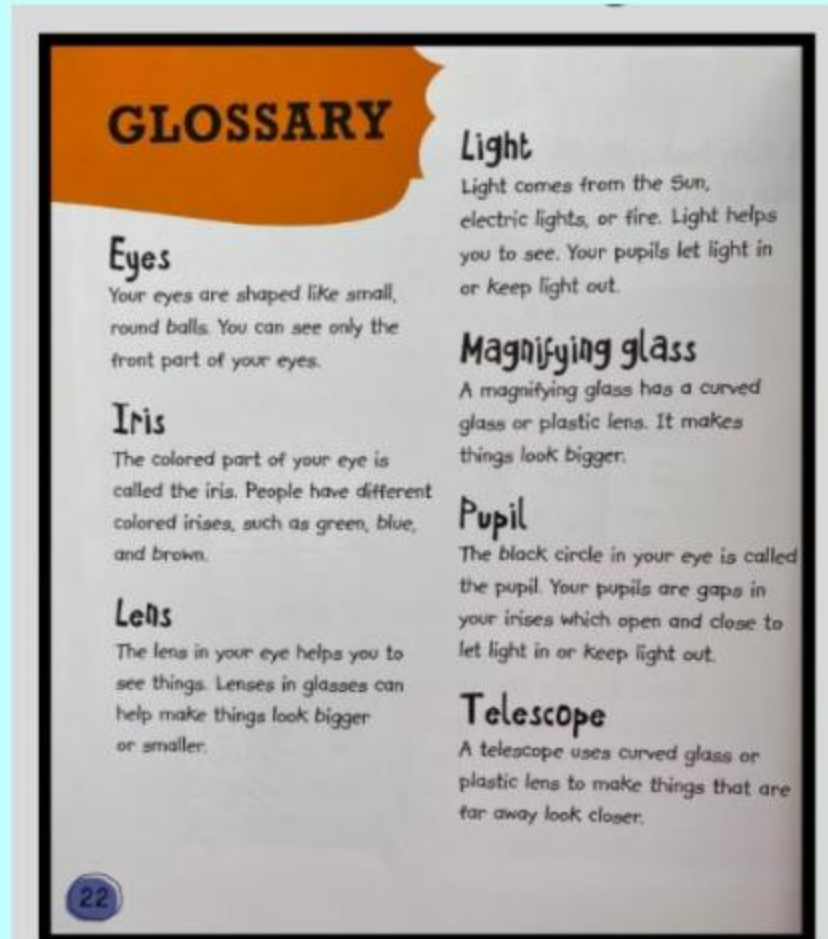
What is the point of these pages?



Friday 11th March 2022

I can create a glossary

A glossary is like a mini dictionary which gives the meaning of KEY words that are in the book.

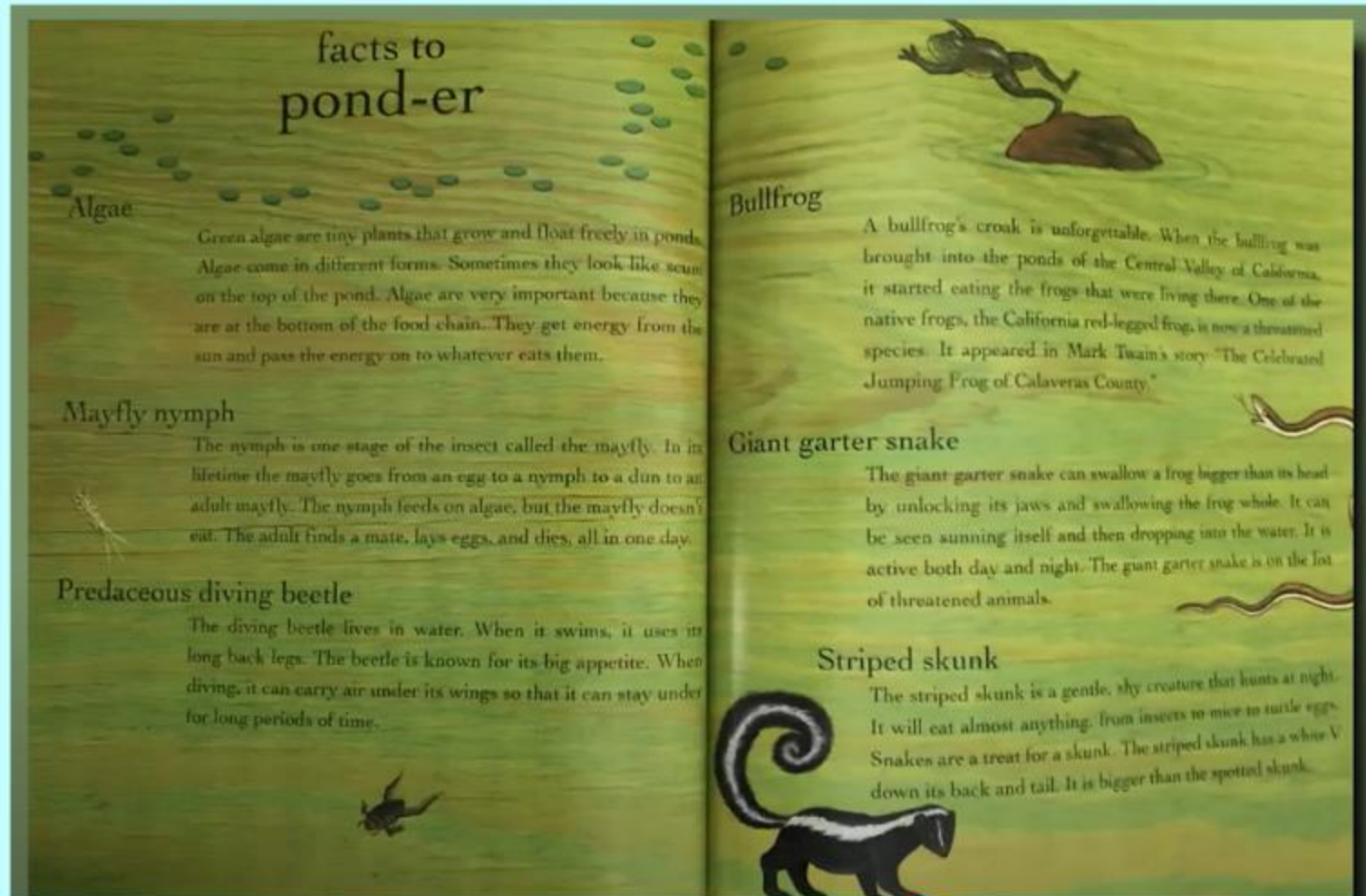


What might this book have been about?

Friday 11th March 2022

I can create a glossary

The words are not in **alphabetical order!**



Friday 11th March 2022

I can create a glossary

Put the words into alphabetical order.

How do we do this?

carnivore	consumer
herbivore	food chain
omnivore	habitat
predator	prey
algae	producer

carnivore	consumer
-----------	----------

Which one comes first?

Friday 11th March 2022


I can create a glossary

TASK: Create a glossary of the key words you have been given.

Each word needs to be its own **subheading**.

You **MUST** put the words in **alphabetical order**

Try your best to explain each term using what you have learnt in science.



1 0. 0 3. 2 0 2 2

I understand length and perimeter

STARTER for
10

x table practise

Watch the video
recapping
perimeter:
<https://vimeo.com/507926422>

Year 3

Length and Perimeter

Name _____



- 1 Measure the line with a ruler.



_____ cm

- 2 From the list, choose an appropriate unit of measure for the height of each object.

centimetres

metres

millimetres



Lighthouse



Tin of beans

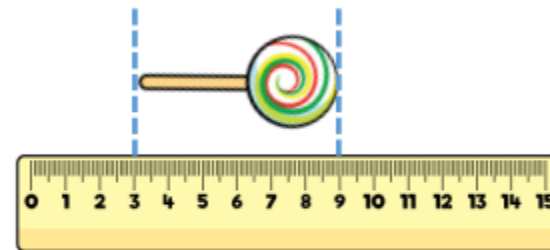


1 mark



2 marks

- 3 How long is the lollipop?



_____ cm

- 4 Match the equivalent measurements.
One has been done for you.

10 mm

2 m

1 m

100 mm

10 cm

20 mm

200 cm

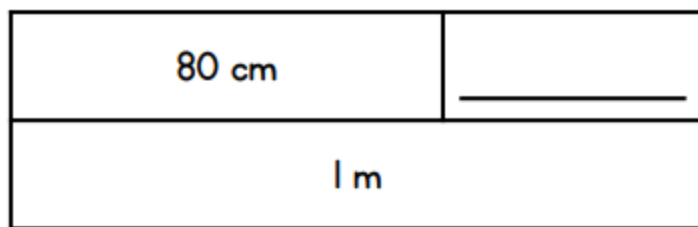
1 cm

2 cm

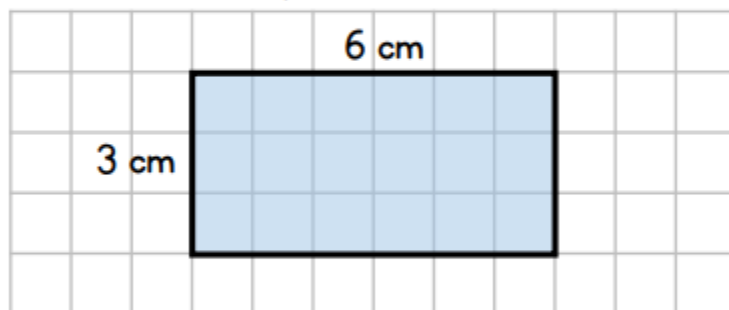
100 cm



- 5 Complete the bar model.



- 6 Calculate the perimeter of the rectangle.
Write units with your answer.



- 7 Write the lengths in order of size starting with the shortest.

1 m

16 cm

61 mm

_____ shortest _____ longest



1 mark

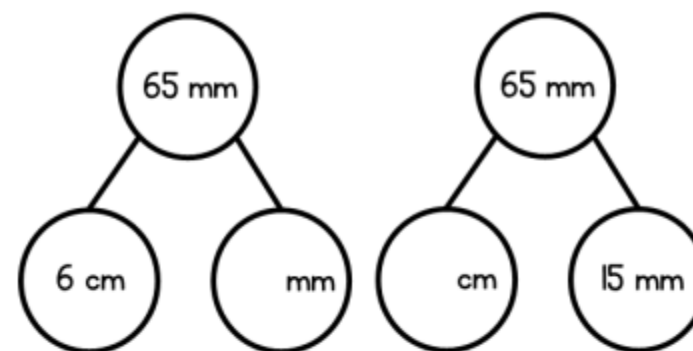


2 marks



2 marks

- 8 Complete the part-whole model.



- 9 The perimeter of the triangle is equal to the perimeter of the square.
What is the length of the square?



? cm



12 cm

_____ cm

Circle how confident you feel with length & perimeter.

1

Not
confident

2

3

4

5

Very
confident

Friday 11th March 2022

I can create a piece of viking art

What are the characteristics of Viking art?

Art made by Scandinavians during the Viking Age (c. 790-1100 CE) mostly encompassed the decoration of functional objects made of wood, metal, stone, textile and other materials with relief carvings, engravings of animal shapes and abstract patterns.



What do you notice about this art?

Friday 11th March 2022

I can create a piece of viking art

What is the style of Viking art?

They loved **abstract and intricate animal designs and multiple interlacing lines**. The animals depicted in their art include serpents, horses, wolves, birds and unreal, fantastic animals. As the Viking Age progressed, craftsmen varied the designs and six distinct but overlapping art styles developed.



**What design will you choose?
Try a few ideas on paper then
draw this onto your wooden disk.**

Friday 11th March 2022

I can create a piece of viking art

What design will you choose?

Try a few ideas on paper then
draw this onto your wooden disk.



