

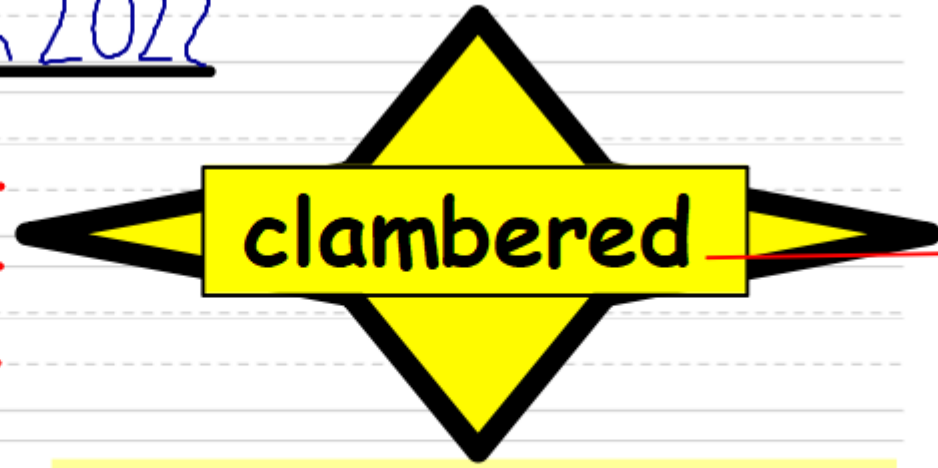
Wednesday 9<sup>th</sup> March 2022

rd

wrk

business

calendar



The second time that you copy, try to use today's **Word of the Day** in your own sentence instead of the sentence below.

During the first half of the year,  
his calendar business is always  
rather slow.

Do you know what this word means? Would you be able to explain its meaning to someone and give an example of its use?

Tuesday 8th March 2022

I can predict the food chain.

Think back to the book.

Which animals were eaten?

How does it link to our science learning?

Tuesday 8th March 2022

I can predict the food chain.

On scrap paper make a prediction for how the food chain might continue.

Either from:

1. An owlet in the owl's nest.
2. Any one of the animals in the story.

Tuesday 8th March 2022

I can predict the food chain.

What is the style the book has been written in?

How can we write in the same style?

This is the owlet. The cute, timid owlet that sleeps in its nest that sits in the tree by Anna's house.

This is the weasel. The delicate but vicious weasel that crept into the nest of the sleeping owlet that nests in the tree by Anna's house.

Tuesday 8th March 2022

I can predict the food chain.

Write in the style of the book describing which animals you think will be gobbled up next!



Check the spelling accuracy of the repeated words

---



Try to use appropriate synonyms for 'eat'.

---



Use excellent expanded noun phrases for the animals.

9.3.2 2

I can investigate problems involving fractions.

Starter:



Game option 8

[mathsframe.co.uk/en/resources/resource/264/  
Crystal-crash-fractions-numbers](https://mathsframe.co.uk/en/resources/resource/264/Crystal-crash-fractions-numbers)

### 9.3.2 2

I can investigate problems involving fractions.

Let's remind ourselves of some examples of how calculations should this be set out in your book?

1.

$$\frac{9}{12} \text{ of } 132 = 99$$

$$132 \div 12 = 11$$

$$11 \times 9 = 99$$

This is an example for a problem within the times tables.

Then, answer the worded problem with a worded answer!

### 9.3.2.2

I can investigate problems involving fractions.

Let's remind ourselves of some examples of how calculations should this be set out in your book?

1.  $\frac{2}{3}$  of  $327 = 218$

$$327 \div 3 = 109$$
$$\begin{array}{r} 109 \\ 3 \overline{) 327} \\ \underline{3} \phantom{00} \\ 27 \\ \underline{27} \\ 0 \end{array}$$

$109 \times 2 =$

$$\begin{array}{r} 109 \\ \times 2 \\ \hline 218 \end{array}$$

This is an example for a problem requiring written methods.

Then, answer the worded problem with a worded answer!



### 9.3.2.2

I can investigate problems involving fractions.

What methods could we use to solve this problem?

Dominic has 20 lollipops. He wants to give his friends  $\frac{1}{5}$  each. How many will each friend receive?

9.3.2.2

I can investigate problems involving fractions.

What methods could we use to solve this problem?

If I keep  $\frac{3}{8}$  of £40. How much will I have?

### 9.3.2.2

I can investigate problems involving fractions.

What methods could we use to solve this problem?

Kush needs to transfer  $\frac{4}{5}$  of his savings to pay for a new oven. He has £650 saved. How much will he need to transfer?

### 9.3.2.2

I can investigate problems involving fractions.

What methods could we use to solve this problem?

Debbie found 144 caterpillars in her garden.  $\frac{2}{3}$  were red and  $\frac{2}{9}$  were yellow. How many altogether were either red or yellow?

### 9.3.2 2

I can investigate problems involving fractions.



Use your times table knowledge to calculate.



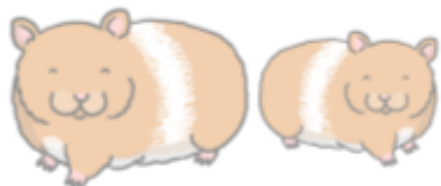
Start with question 4. You may need to use written methods to calculate from qu. 8.



Start with question 8. You must show your written methods when the dividend is out of the times tables.

**Remember to answer in a sentence!**

1. Harry's hamster is 14cm long. Theo says his hamster is  $\frac{1}{2}$  as long. How long is Theo's hamster?



2. The Giant finds a beanstalk which is 20m tall and climbs  $\frac{1}{2}$  way up.

Jack finds a beanstalk which is 24m tall and climbs  $\frac{3}{4}$  of the way up.

Who climbs the highest?



3. The Giant has 15 coins. He spends  $\frac{1}{3}$  of them.



Jack has 12 coins. He spends  $\frac{1}{2}$  of them.

Who spends more?

4. Claire has 18 Mini Eggs. She wants to give her friends  $\frac{1}{6}$  of the total each. How many will each friend receive?

5. Some friends are out to dinner at a restaurant. The bill comes to £60. Suniti offers to pay  $\frac{3}{5}$  of it. How much will it cost her?

6. How many minutes are in  $\frac{4}{10}$  of an hour?

7. A cup holds 55ml of liquid. If  $\frac{2}{5}$  spilled out, how much would be left in the cup?

8. Neil wants to split his running training. He wants to run a total of 48km. He would like to run  $\frac{1}{6}$  on Friday,  $\frac{3}{6}$  on Saturday and the rest on Sunday.

- How far should he run on Friday?
- How far should he run on Saturday?
- How far will be left to run on Sunday?

9. Ken threw a javelin 88m. His next throw only  $\frac{5}{11}$  the distance. How far did his second throw go?

10.

Monique has won £45 in a raffle. She would like to give  $\frac{2}{9}$  to her sister and  $\frac{3}{9}$  to her son.

- How much will her sister receive?
- How much will her son receive?
- How much will she have left for herself?

11.

Name of	Rose	Conifer	Camellia	Petunia
Number of	90	64	87	255
Fraction sold	$\frac{4}{6}$	$\frac{3}{8}$	$\frac{2}{3}$	$\frac{3}{5}$
Number of plants sold	a?	b?	c?	d?

14.

a. How many hours are in  $\frac{3}{4}$  of one day?

b. How many minutes are in  $\frac{3}{4}$  of one day?

*Remember, you can only use column multiplication when the divisor is a single-digit.*

16. Ronald entered a 1855-word story

competition. He wrote  $\frac{4}{7}$  of the story on Monday and finished the rest on Tuesday.

a) How many words did he write on the first day?

b) How many words did he write on the second day and what fraction was this?

12. Opal has a 392cm length of string. She

needs to cut  $\frac{5}{8}$  off.

a) How long will the length be that she cuts off?

b) What length will be left?

13. Primrose needs to transfer  $\frac{7}{9}$  of her savings to another bank account. She has £450 saved. How much will she need to transfer?

15. There were 2424 school children going on a residential trip. There were six dormitory blocks,

each housing  $\frac{1}{6}$  of the children. On Block B,  $\frac{3}{4}$  of the children had travel medication with them.

a) How many children were in each block?

b) How many children had travel medication in Block B?

17. Saskia watched a film that was three and a half hours long!  $\frac{3}{7}$  of the way through the film, Saskia had to pause it because the postman knocked at the door with a parcel.

a) How many minutes had Saskia watched when she had to pause the film?

b) How many minutes did Saskia have left to watch?

Wednesday 9th March 2022

I can import a web picture into Photo Story.

Look at your plan. What pictures will you need to tell your story?

[www.microsoft.com/en-us/p/photo-story/9nblggh1z351](http://www.microsoft.com/en-us/p/photo-story/9nblggh1z351)



Let's learn: 

Use your list of pictures and start to explore how to import them into your story.



# Photo Story 3 for Windows

A step by step guide

Download free from Microsoft

## Welcome to Photo Story 3 for Windows



Photo Story helps you to create exciting video stories by adding panning and zooming effects to your pictures.

Use Photo Story to record narration for your pictures, and add titles and background music to your story. You can also share your story in a variety of ways.

**Select one of the following options, and then click Next.**

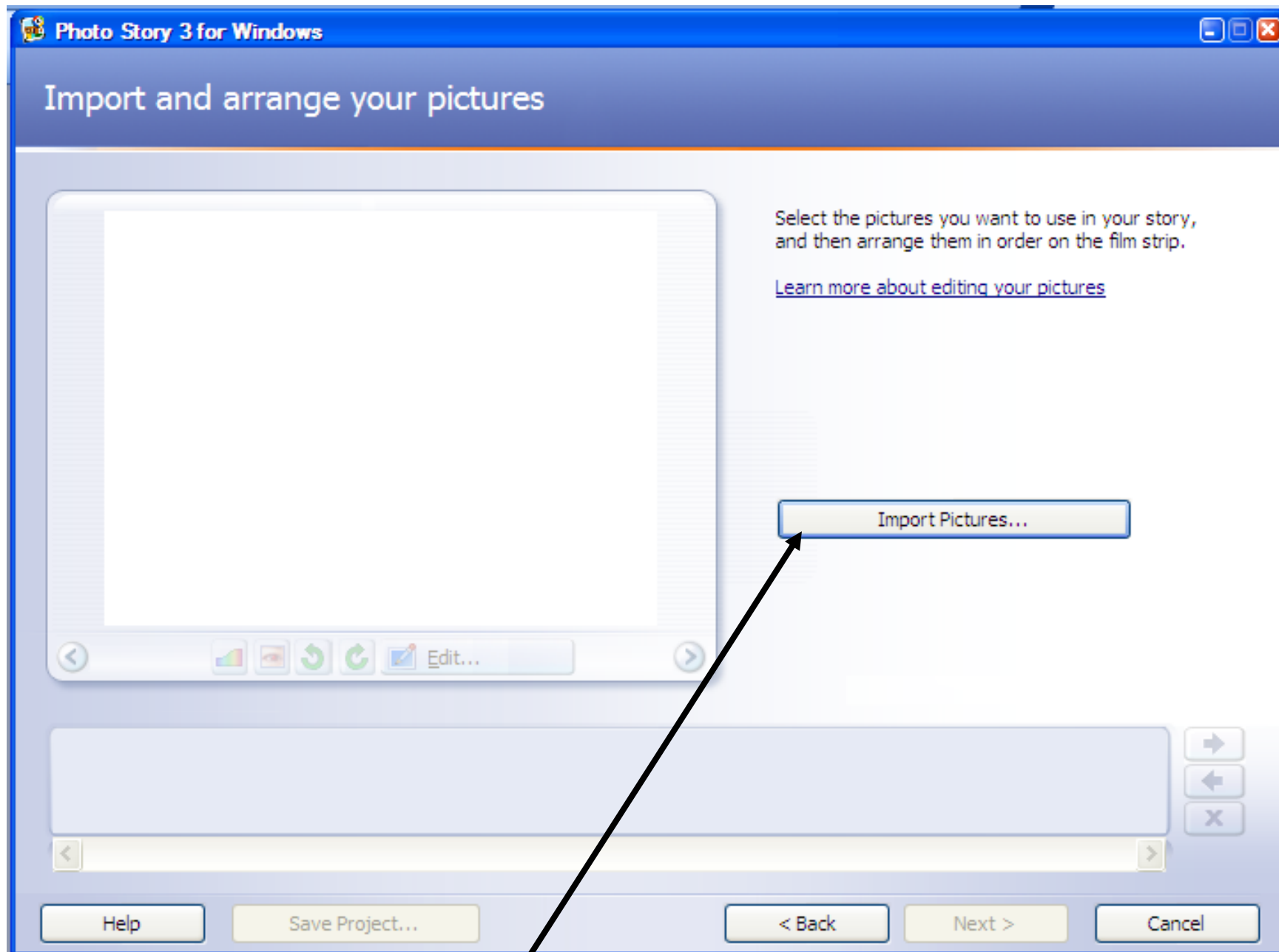
- ☒ Begin a new story
- ☐ Edit a project
- ☐ Play a story

[Help](#)

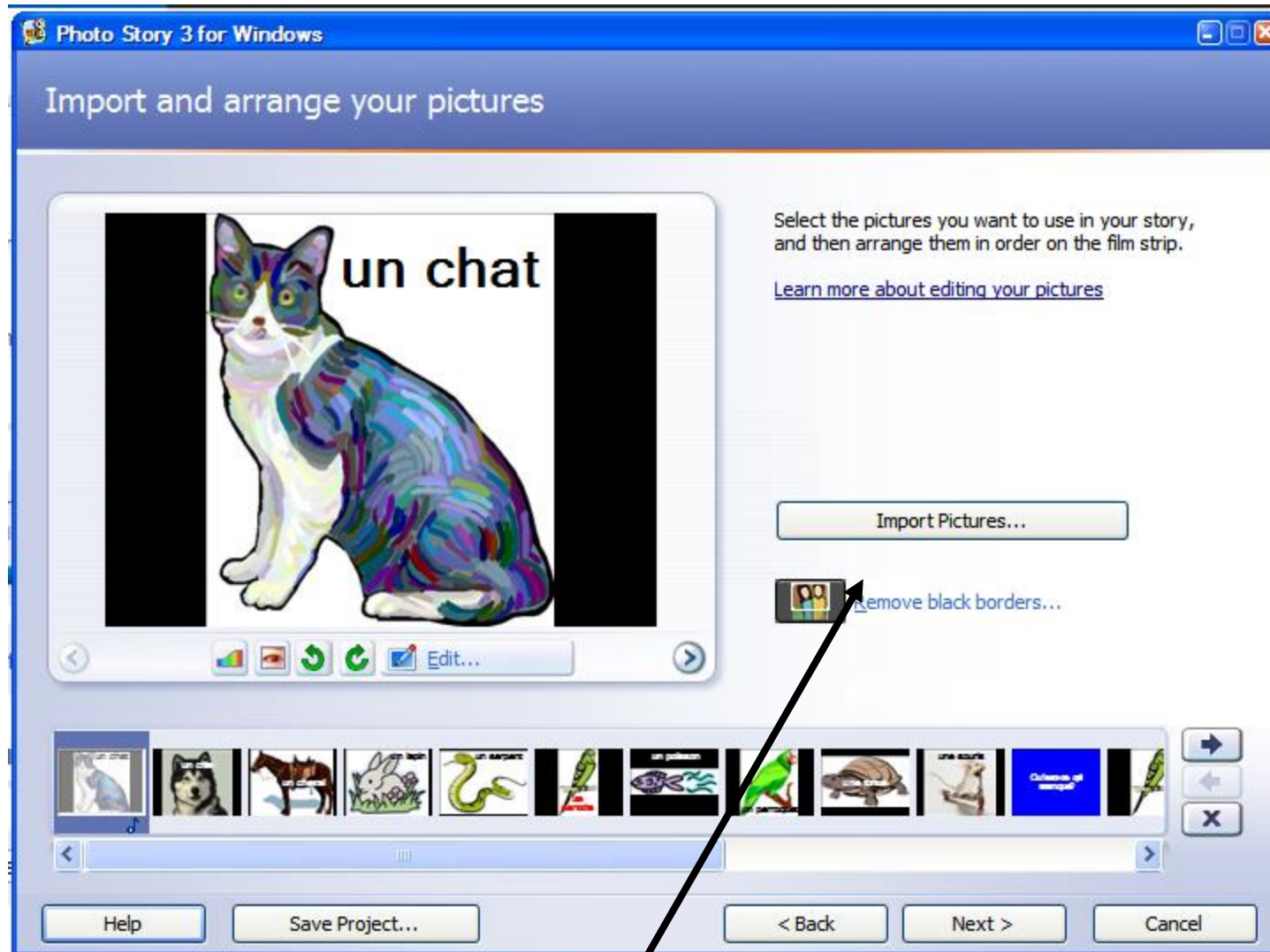
&lt; Back

Next &gt;

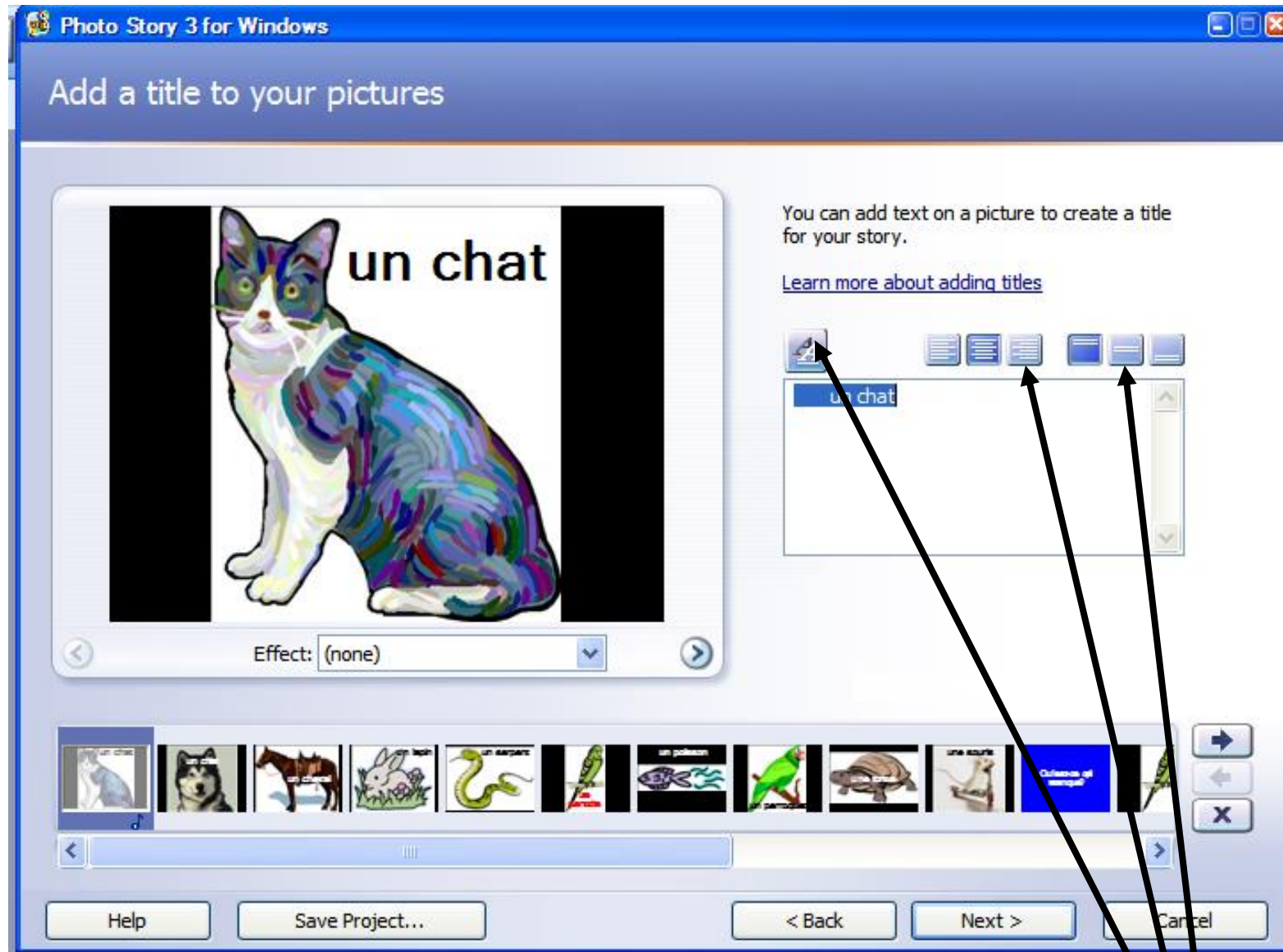
Cancel



This will take you to My Pictures where you can select the pictures you want.



Keep importing until you have all you need. Click Next.



Type the words you need. You can edit them by clicking on these icons.