

Thursday 17th February 2022



to Y2 Remote learning


# Literacy



Thursday 17th February 2022  
I can write about my animal

What animal types are there?

Where do different animals live?





Thursday 17th February 2022  
I can write about my animal

What can you tell me about these animals?



features

habitat

food

animal type


movement

Thursday 17th February 2022  
I can write about my animal

Use exclamation sentences.

What a fast animal!

What a \_\_\_\_\_!



How wide the eagle's wings are!

How \_\_\_\_\_!






Thursday 17th February 2022  
I can write about my animal

Use question sentences.

Do you know what animal type an eagle is?



How does an eagle fly so high?



Thursday 17th February 2022

I can write about my animal



Underline the **noun phrases**, **conjunctions** and **suffixes**

High above the tallest trees in the jungle  
the giant, graceful eagle soars and swoops.

White, strong tail feathers fan out behind him  
and he also has white, tipped wings that help  
him to glide effortlessly. If he spots his prey  
he dives quickly through the dense, green  
jungle canopy. Catching his helpless prey in  
his sharp, hooked talons the eagle.....



Thursday 17th February 2022

I can write about my animal

Make sure that you include:

Joined up handwriting

Capital letters and full stops

Noun phrases

Connectives

Sentence starters


Suffix words

Different sentence forms





# MATHS



170222

I can solve 2D and 3D shape problems

A 4 3

A 4 4

Vocabulary

Faces

Edges

Vertices or corners

Sides

170222

I can solve 2D and 3D shape problems.

Can you answer these questions on shapes?

Match each shape to its name.



cube

cylinder

pyramid

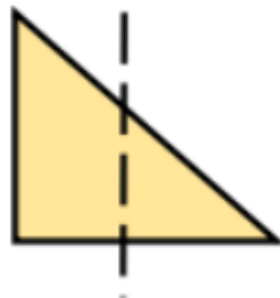
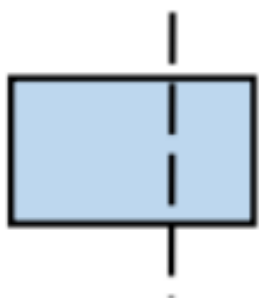
cone



170222

I can solve 2D and 3D shape problems

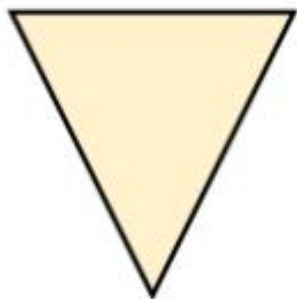
Circle the shapes with a correct line of symmetry.



170222

I can solve 2D and 3D shape problems.


Complete the sentences.



This is a triangle

It has  sides.

It has 3 vertices.



This is a \_\_\_\_\_

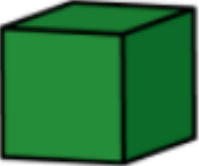

It has  sides.

It has  vertices.

17.02.22

I can solve 2D and 3D shape problems.

Complete the table.

| Shape   | Faces | Edges | Vertices |
|---|-------|-------|----------|
| <br>Cube                     | 6     |       | 8        |
| <br>Square-based<br>pyramid |       | 8     | 5        |



170222

I can solve 2D and 3D shape problems

Amir has sorted some 3-D shapes.



Choose one correct label for each group from the labels below.

Cylinders

Cuboids

Cubes

Curved  
surfaces

# Handwriting



Handwriting

Thursday 17th February 2022

o

m

om

om



# Theme



17.02.22

I can name a variety of animals  
and sort them into groups.

Remind me: what were the 5 animal groups?

17.02.22

I can name a variety of animals and sort them into groups.

Mammal


Reptile



Amphibian

Bird

Fish



17.02.22

I can name a variety of animals and sort them into groups.

Mammal

A mammal has ...



---

Reptile


A reptile has ...



---

Fish

A fish has ...





17.02.22

I can name a variety of animals and sort them into groups.


Bird



A bird has ...

---

Amphibian



An amphibian has ...

---