

Thursday 10th February 2022

although

opposite

● enough

"Please do not violate my personal space," said the man.

Can you write your own sentences using the spelling words?

Thursday 10th February 2022

I can write a story including a beginning, middle and end.

Re-read your story plan.

What are the key points of your story?

Does it have a clear beginning, middle and end?

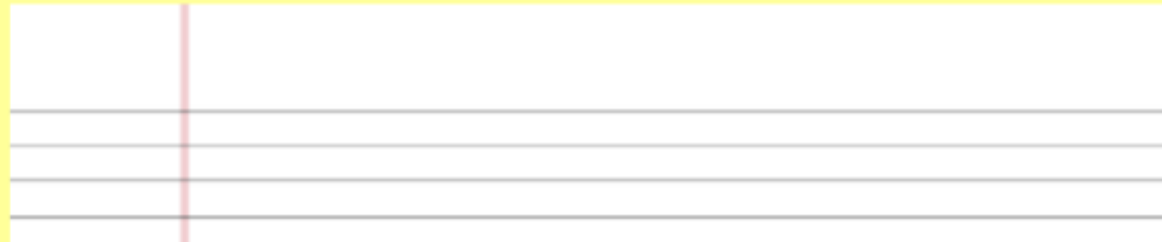
Add or change anything you need.

Thursday 10th February 2022

I can write a story including a beginning, middle and end.

Paragraphs... a great video to explain when to use them

<https://www.youtube.com/watch?v=Bmu-vlivYs4>

A graphic of a blank sheet of white paper with horizontal blue lines. A vertical red line is positioned on the left side, creating a margin. The paper is centered on a yellow background.

Thursday 10th February 2022

I can write a story including a beginning, middle and end.

Using your plan, write your story including a clear beginning, middle and end.

Start a new paragraph for each.

All: Remember to use different sentence openers

10.02.2022

I can interpret bar charts and tables

Starter for ten

Order these statements

$50 - 20$

$35 + 12$

5×9

$100 \div 2$

_____ > _____ > _____ > _____

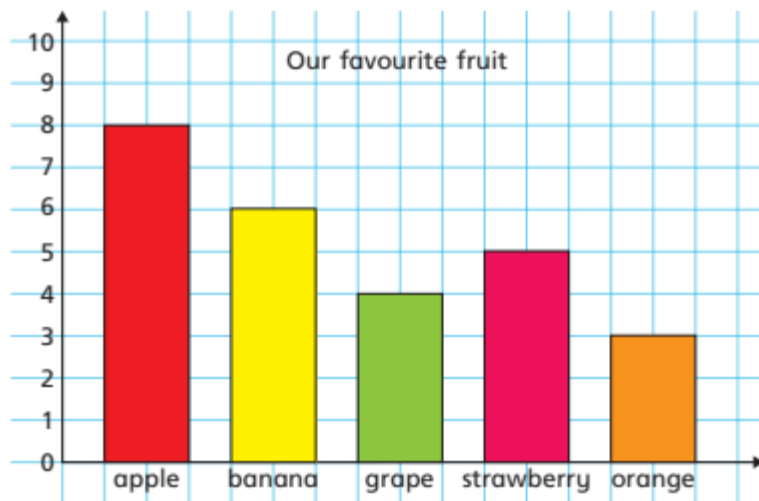
Remember to spend 10 minutes on times table rock stars

Use the video found here to support your learning:
<https://vimeo.com/502337848>

Bar charts

- 1 All the children in Class 3 choose their favourite fruit.

The bar chart shows the results.



Use the bar chart to answer the questions.

- a) What is the most popular fruit? _____
- b) How can you tell just by looking?

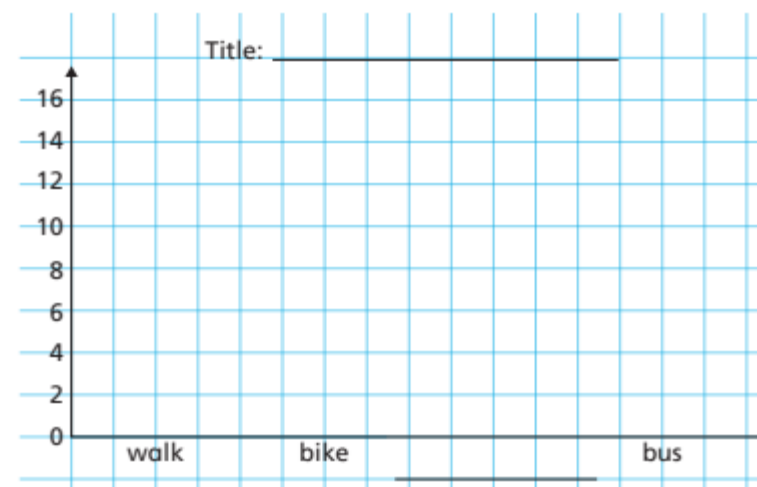
- c) What is the least popular fruit? _____
- d) How many more children like apples best than like grapes best?
- e) How many children are there in Class 3?

- 2 Some children are asked how they get to school.

The tally chart shows the results.









Method	Tally	Total
Walk		
Bike		
Car		
Bus		

- a) Complete the chart.
- b) Draw a bar chart to represent the data.

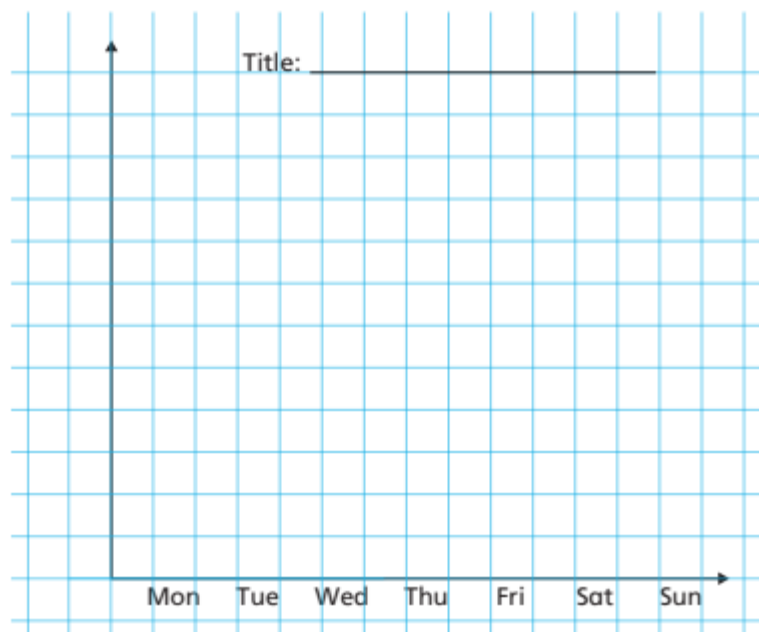


- c) Which chart do you prefer? Tick your answer.
tally chart ☐ bar chart ☐
- What are your reasons?

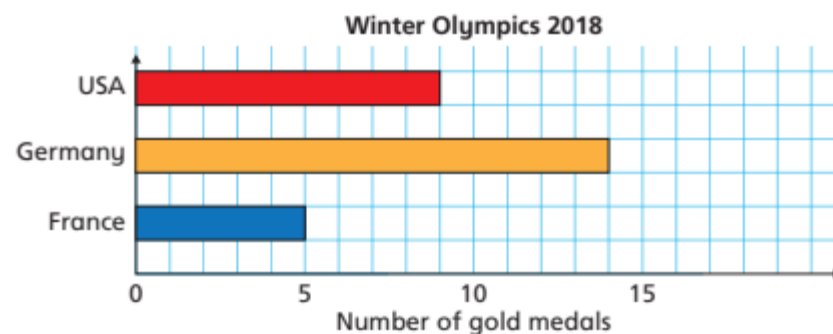
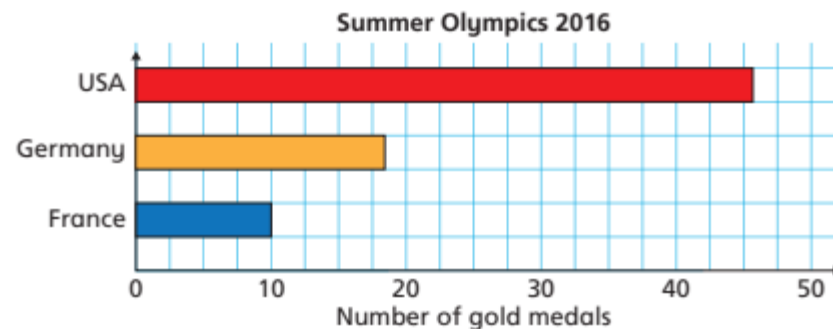
- 3 The pictogram shows the number of ice creams sold each day.

Day	Number of ice creams sold	Key  = 5 ice creams
Monday		
Tuesday		
Wednesday		
Thursday		
Friday		
Saturday		
Sunday		

Draw a bar chart to represent this data.



- 4 The bar charts show the number of gold medals won by some countries in the Summer and Winter Olympics.



- a) Germany won more medals at the Winter Olympics than the Summer Olympics as the bar is longer.



Is Mo correct? _____

How do you know?

- b) Which country won the most medals in total?

Thursday 10th February 2022

I know about the miracles performed by Jesus



Key words

miracles Christianity disciples

What can you recall from last week?



Thursday 10th February 2022

I know about the miracles performed by Jesus



What does this mean?

Can you remember any of the Jesus' miracles?



Thursday 10th February 2022

I know about the miracles performed by Jesus

Jesus calms the storm

One day, Jesus and his disciples were crossing the sea of Galilee.

Suddenly a huge storm broke out and the boat started to sink.

Everyone was terrified and woke Jesus up. He told the wind and waves to settle down.



Thursday 10th February 2022

I know about the miracles performed by Jesus
Jesus walks on water



Jesus sent his disciples in a boat and said he would join them later as he was praying.

Suddenly a storm started. In the distance, they saw Jesus walking towards them.

Peter wanted to walk on water too. He stepped out and found himself walking on water until he started to feel afraid and then started to sink.



Thursday 10th February 2022

I know about the miracles performed by Jesus
Jesus feeds the 5,000



A large group of people came to hear Jesus speak but soon they became hungry.

Everyone was worried about how they were going to feed 5,000 people with just 5 loaves of bread and 2 loaves of fish.

Jesus gave thanks to God for the food and amazingly the food didn't run out. There was even enough for 12 baskets of leftovers.



Thursday 10th February 2022

I know about the miracles performed by Jesus
Jesus heals a blind man

Jesus came across a man, who had been born blind, begging on the road side.

Jesus walked over to the man and said, "While I am in the world, I am the light of the world." Then he spat on the dusty ground, mixed it into some mud and rubbed it gently on the man's eyes.

He told the man to go and wash his face in the pool of Siloam. The man returned and was overjoyed that he could see!



Thursday 10th February 2022

I know about the miracles performed by Jesus



Task: Retell one of Jesus' miracles as a comic strip
