

A17 Monday 7th February 2022

A18 I can describe an animal.

A27



Write your date and learning objective.


Monday 7th February 2022

I can describe an animal.

Look at the cover

Why might the giraffe be lonely?

How does his expression suggest that he is lonely?



Monday 7th February 2022

I can describe an animal.




What animals can you see?

Monday 7th February 2022

I can describe an animal.

How would you describe the giraffe?




-ly -ness -est

Monday 7th February 2022

I can describe an animal.

Wordburst some adjectives for the animal on your sheet.



What adjectives did you think of?

-ly -ness -est

Monday 7th February 202

I can describe an animal.



Can you identify the adjectives in these sentences?

The tall, thin giraffe has a strong, long neck that helps him to reach tall into the leafy trees. On his body, there is an orange, patched pattern that covers him from head to toe. Straight legs stretch out from beneath the harmless giraffe.

-ly -ful -ness -ment -en -est -less

Monday 7th February 2022

I can describe an animal.

Write sentences to describe the animals.



A17 Use capital letters and full stops.


A18 Use expanded noun phrases.

A27 Use suffix words.

Monday 7th February 2022

I can describe an animal.

What have you learnt today?



All the animals met near
morning to discuss the jungle as
their turn to speak, but no one listen
The giraffe was just too tall. By the time
spread his spindly legs and lowered his head
the ground the other animals had lost interest

7.2.22

MATHS

10:45 - 11:45

7.2.2.2

A2

I can compare numbers.



A3

COMPARE NUMBERS
WITHIN 50



<https://vimeo.com/503102857>

7.2.22



Greater
than

Less
than

Equal
to

$>$

$<$

$=$

A2

I can compare numbers.

A3

Greater than

$>$


Equal to

$=$

Less than

$<$

shutterstock.com • 1988136752



7.2.22



Greater
than

Less
than

Equal
to

$>$

$<$

$=$

A2

I can compare numbers.

A3

Greater than

$>$


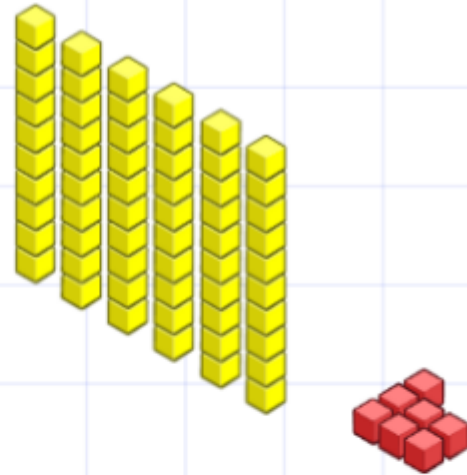
Equal to

$=$

Less than

$<$

shutterstock.com • 1988136752



7.2.22



Greater
than

Less
than

Equal
to

$>$

$<$

$=$

A2

I can compare numbers.

A3

Greater than

$>$

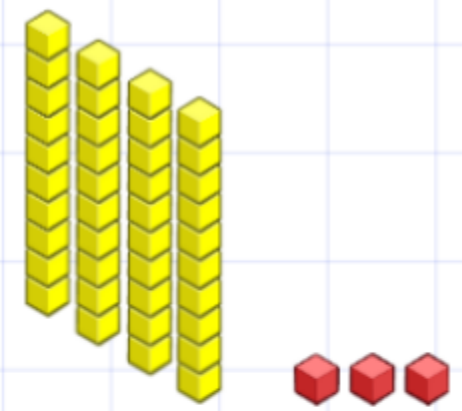
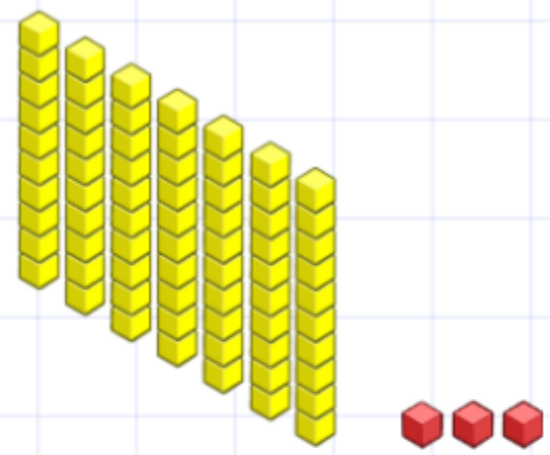
Equal to

$=$

Less than

$<$

shutterstock.com • 1988136752



1 Tick the number sentences that are true.

Use cubes or counters to help you.

- a) 12 is more than 13
- b) 33 is less than 41
- c) 2 tens and 8 ones is equal to twenty-eight
- d) $40 + 8$ is more than $30 + 9$
- e) Thirty-one is less than 3 tens

2 Write the missing phrase.

greater than

less than


equal to

- a) 22 is _____ 29
- b) 41 is _____ 4 tens
- c) Forty-six is _____ $40 + 3$
- d) $40 + 8$ is _____ one more than 47



3 Write $<$, $>$ or $=$ in each circle.

24



3 tens and 14 ones

4 Complete the table.

Write or draw your answers.



	is more than	
	=	
	>	
	is less than	
	is equal to	

Theme

1:30-2:00




7.2.22

I can name animals.


Draw and label a picture of an Australian Animal.

Manatee



Koala

Kangaroo



Crocodile



Kookaburra



Frog