

Friday 4<sup>th</sup> February 2022

reg

ign

regular

reign

quest

The second time that you copy, try to use today's **Word of the Day** in your own sentence instead of the sentence below.

The Queen has made and will make regular decisions on how the country is ran during her reign.

Do you know what this word means? Would you be able to explain its meaning to someone and give an example of its use?

Friday 4th February 2022

I can edit my writing.

*Read through your writing carefully.*

- How do you think you have done?
- Does your work make sense?
- Do you think you have achieved your target?
- Could you add anymore to show better understanding of the target?
- Could you add more detail?
- Could you use more of a range of features?

Two stars




and a wish.

Friday 4th February 2022

I can edit my writing.


Key



= spelling mistake



= error



= great sentence



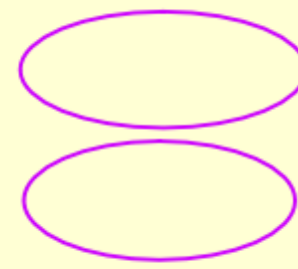
= not edited




= LO link - 4 examples of where you have shown  
you have achieved your target.


Friday 4th February 2022

I can edit my writing.



 = spelling mistake

• = error

 = great sentence

✓ = not edited

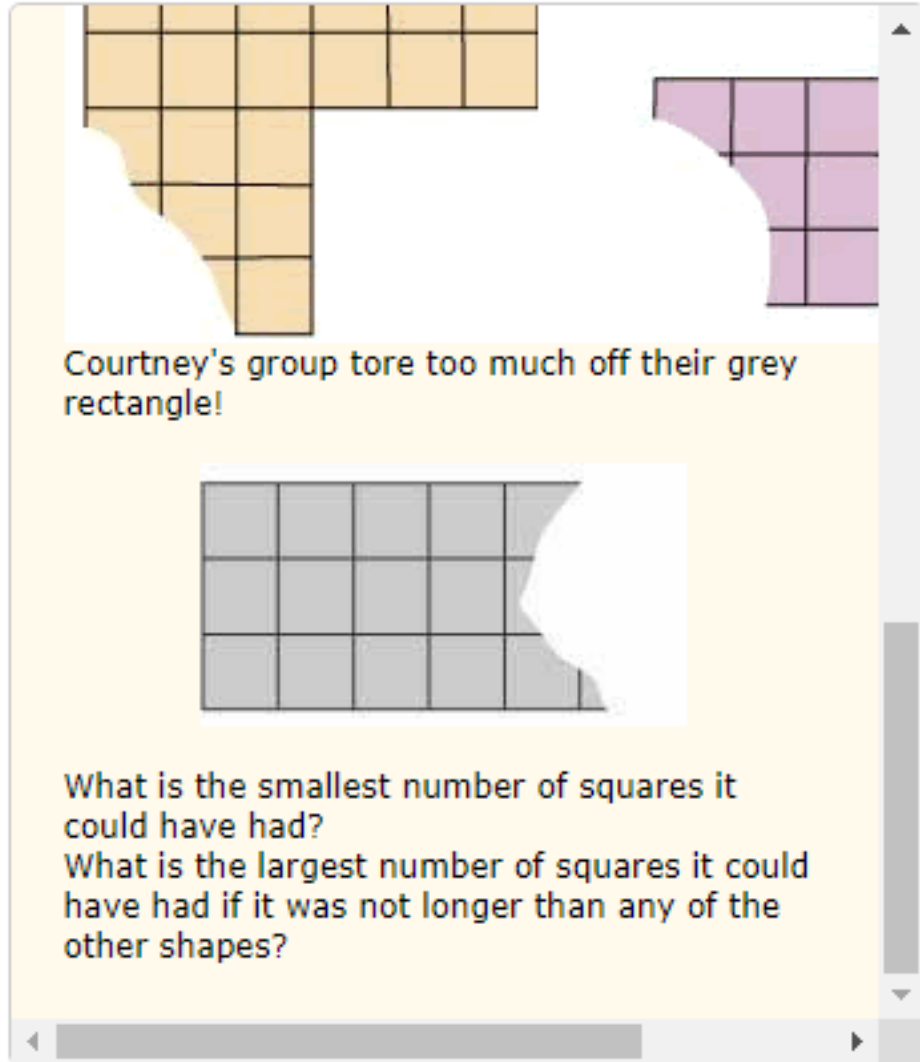
✓ = LO link -  
tick 4  
places  
where you  
can see  
your target.

Harold was anxious. He could see the monster coming up from the sea and didnt know what to do so got out his sord and swung. That was the end of the sea monster.

Friday 4th February 2022

I can edit my writing.

- Use the key to assess your writing.
- Check one sentence at a time...if you don't edit it then put a tick at the end.
- Remember to stay in order, don't jump about!



The screenshot shows a webpage with a yellow background. At the top, there are two shapes made of squares: an orange one on the left and a purple one on the right. The orange shape is a 4x5 rectangle with a 2x2 square missing from the bottom-left corner. The purple shape is a 3x3 square with a 1x2 rectangle missing from the bottom-left corner. Below these, there is a grey rectangle that is 3 rows high and 5 squares wide. The right side of the grey rectangle is missing, leaving a jagged edge. The text below the grey rectangle asks for the smallest and largest number of squares it could have had.

Courtney's group tore too much off their grey rectangle!

What is the smallest number of squares it could have had?  
What is the largest number of squares it could have had if it was not longer than any of the other shapes?

**Friday 4<sup>th</sup> February 2022**

**I am carrying out an investigation relate to area.**

Complete this section, use your knowledge of area to help you investigate and discover what the area of these shapes are.



Friday 4th February 2022

I can use watercolour pencils effectively.



Friday 4th February 2022

I can use watercolour pencils effectively.





Friday 4th February 2022

I can use watercolour pencils effectively.



Friday 4th February 2022

I can use watercolour pencils effectively.

Use the masking tape to create a simple image on your page.

Remember, a simple image!

Now, let's learn how to use watercolour pencils.  

<https://www.youtube.com/watch?v=hoHW59DJ4VA&t=872s>

<https://www.youtube.com/watch?v=y1VAxJf6VXw>

Friday 4th February 2022

I can use watercolour pencils effectively.

Use the watercolour pencils to create a background or scene.

Use water to blend the colours.

It is very important that the edges of the tape are painted.

