

Wednesday 2nd February 2022

· forward

· straight

· February

During February, squirrels scavenge for nuts so they don't go hungry.

Now write sentences containing the spelling words

GOOD
MORNING

WORD

scavenge



Wednesday 2nd February 2022

I can plan a story using my treasure map

Today we will:

- plan our adventure story
- decide on who our characters are

Key words

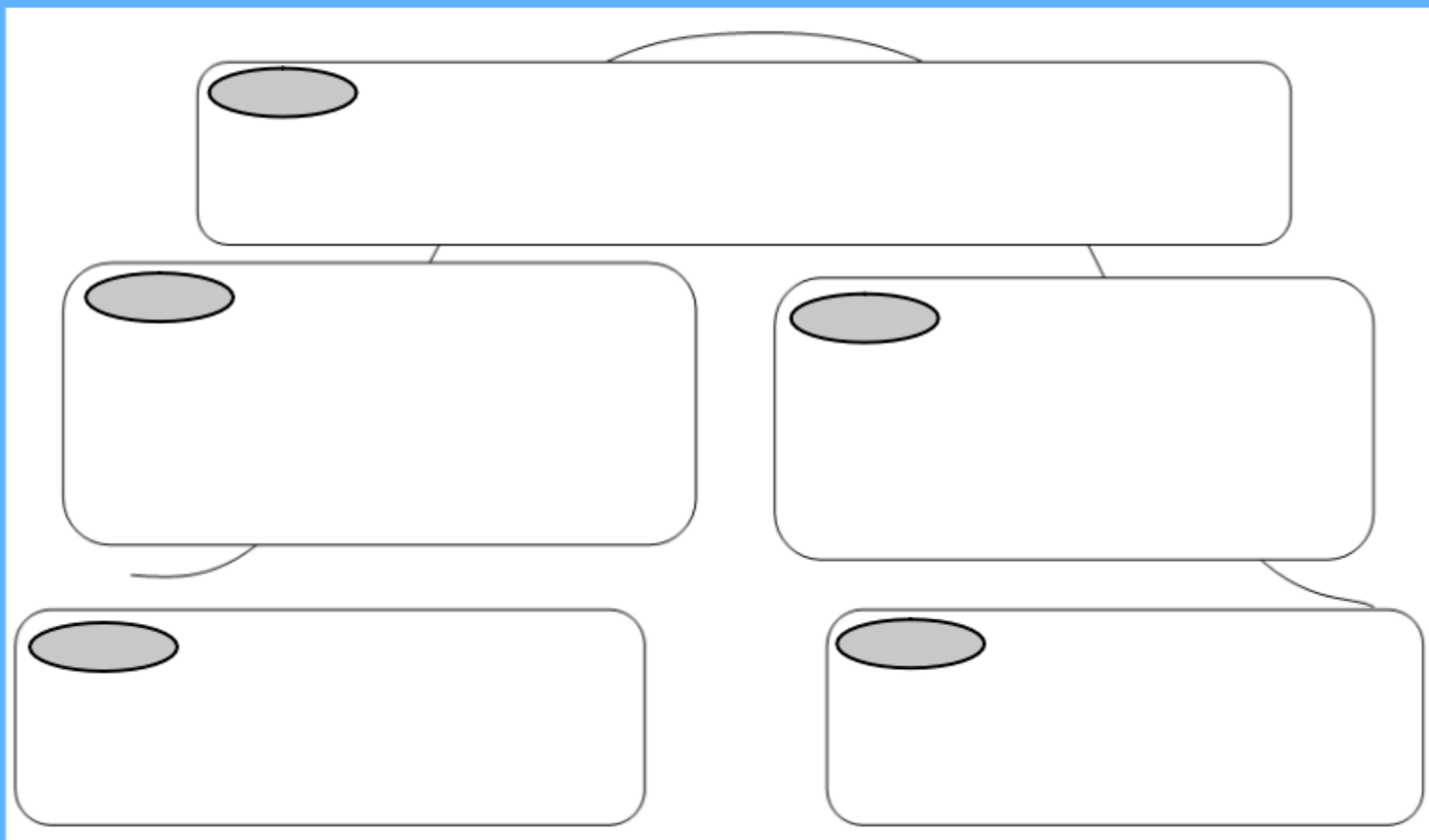
beginning

middle

end

I can plan a story using my treasure map.

What does each stage of the story mountain represent?



I can plan a story using my treasure map.

What is going to happen on the island?

What problems are your
adventurers going to have?



I can plan a story using my treasure map.

What should you include in each section?

Problem:

1. Misty mountains: too far to go around so characters have to climb. Rocks loose so have to tread very carefully.
2. Bridge of doom. Rickerty with lots of missing boards. Crocodiles in the river below.
Have to cross one at a time.

Wednesday 2nd February 2022

I can plan a story using my treasure map.

Use the planner to plan your ideas for
your story.

MUST: Give information on the problems.

SHOULD: Give lots of detail on each problem the character(s) will have to overcome.

COULD: Include information on characters to meet.

Story Planning Mountain

Problem:

Build up:

Resolution:

Opening:

Ending:

0 2. 0 2. 2 0 2 2

I can find change

Starter for ten

Order these statements

$100 \div 4$

$15 + 6$

5×7

$50 - 20$

_____ > _____ > _____ > _____

Remember to spend 10 minutes on times table rock stars

The tutorial for today's work is found at:
<https://vimeo.com/499227948>

Give change




1 How much change would you get from a £10 note?

a)  £ and p

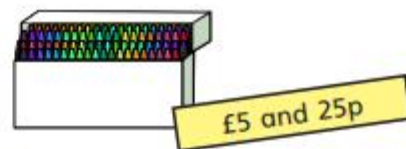
b)  £ and p

c)  £ and p

d)  £ and p

e)  £ and p

2 Annie buys some crayons.



She pays with this money.



She gets this change.



Has Annie been given the correct amount of change?

Explain your answer.

3 Huan buys a hot chocolate for £2 and 60p.

He pays with a £5 note.

How much change does he get?

£ and p

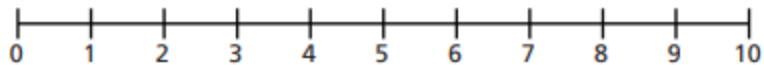
- 4 Dani buys a milkshake.
She pays with a £5 note.
She gets £2 and 60p change.
How much did the milkshake cost?

£ and p

- 5 Ms Hall has £9 to buy breakfast.
She gets £4 and 25p change.

| | |
|----------|------------|
| Waffles | £4 and 75p |
| Omelette | £5 and 75p |

Which breakfast does Ms Hall buy?
Use a number line to explain your answer.



Ms Hall buys the _____ for breakfast.

- 6 A train ticket costs £3 and 60p.
A bus ticket costs £2 and 85p.
Mr Khan buys a train and a bus ticket.
He pays with a £10 note.
How much change does he get?

£ and p

- 7 Mrs Dean buys a T-shirt.
She pays with a £10 note.
She gets four coins in change.
Each coin is different.



a) What is the lowest possible price of the T-shirt?

£ and p

b) What is the highest possible price of the T-shirt?

£ and p

Compare answers with a partner.



Wednesday 2nd February 2022

Miércoles 2 de Febrero de 2022

I can use "toco" to say what I play



Wednesday 2nd February 2022

Miércoles 2 de Febrero de 2022

I can use "toco" to say what I play

Toco la guitarra



La batería
La trompeta
La guitarra
La flauta
El clarinete
El violín
El piano
El triángulo
El arpa
Los címbalos

Match the pictures to the Spanish words.

Practise saying what you play using 'toco'