

Monday 31st January 2022



to Y2 Remote Learning

Literacy



Monday 31st January 2022

I can describe the penguin

Which words do we use to describe?



When two **adjectives** are put in front of the **noun** we call it a noun phrase.

Penguin Small had a **pointed, orange** beak.

Monday 31st January 2022

I can describe the penguin

Make notes on paper.

What is Penguin Small like?

Think about his -

Personality - his character

Appearance - what he looks like

Feelings - how he feels in the story




Monday 31st January 2022

I can describe the penguin

Personality

Appearance

Feelings



Monday 31st January 2022

I can describe the penguin

Complete these sentences by adding a suffix word.

-ly -ful -ness -ment -en -est -less



Penguin Small was full of _____ness when the other penguins left.

Penguin Small was the _____est penguin in the group.


He felt _____ly because he was the only penguin left at the North Pole.

Penguin Small jumped with _____ment when he saw the other penguins in the distance.

Monday 31st January 2022

I can describe the penguin

-ly -ful -ness -ment -en -est -less



Can you put these words into a sentence?

thoughtful

frozen

helpless

Monday 31st January 2022
I can describe the penguin

Write sentences to describe Penguin Small.



Include adjectives to describe the penguin.

Use connectives to extend sentences.

and, or, but, when, if, that, because

Use suffix words to describe feelings.

-ly -ful -ness -ment -en -est -less


Penguin Small was full of sadness **when** the other big, brave penguins left.

Monday 31st January 2022
I can describe the penguin



What have you learnt today?

MATHS



3 1. 0 1. 2 2

I can find double and half of a given number.

What do these words mean?

Double

Two lots of the same
number or amount

Half

Two equal parts of a whole
number or amount.

Double 2 is 4.



Half of ___ is ___

3 1. 0 1. 2 2

I can find double and half of a given number.



Use this link to access the teaching presentation.

<https://vimeo.com/490420115>

I Complete the sentences.

Use the pictures to help you.



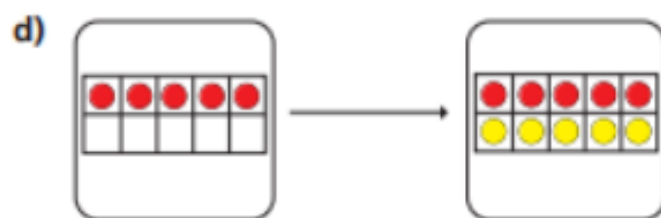
Double 1 is



Double 2 is



Double is



Double is

2 Match the doubles to the additions.

Double 3

Double 6

Double 10

Double 7

$6 + 6$

$7 + 7$

$3 + 3$

$10 + 10$

3 Fill in the gaps.

a) Double 15 is

b) Double 11 is

c) Double 12 is

d) Double 20 is

e) Double is 8

f) Double is 16

4



I have doubled the number of strawberries.



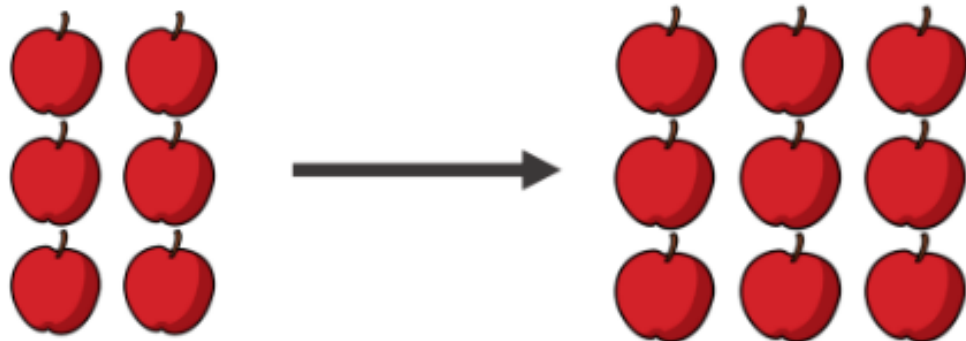
Do you agree with Mo? _____

3 1. 0 1. 2 2

I can find double and half of a given number.

True or False ?

Making doubles



The apples have doubled

Handwriting



Handwriting

Monday 31st January 2022

i

i

il

il

Theme - Geography/Science



31.01.22

I can see how life is different in Australia.

How do you think that life may be different for people in Australia?

Let's find out more

Life in Australia

<https://www.bbc.co.uk/education/clips/zpvgp39>



31.01.22

I can see how life is different in Australia.

What are the differences between the life styles that the two children have?

England

Australia

31.01.22

I can see how life is different in Australia.

Draw a picture of each child showing where they live.

<u>England</u>	<u>Australia</u>

Write about the differences in their lifestyles.

Houses
Food
Weather
Hobbies
Landscape