

Tuesday 25th January 2022



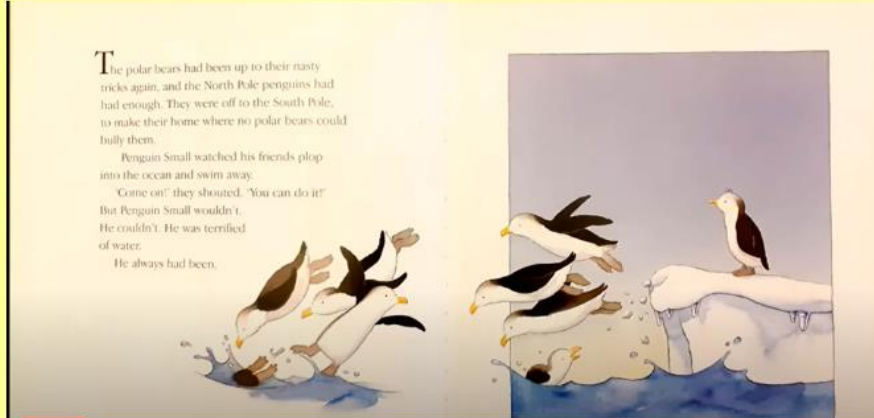
Year 2 Remote Learning

Literacy

9:00 – 10:15



Let's read some of the story to find out if our predictions were correct.




STOP reading at this page where Penguin Small is afraid of the water.

[Penguin Small - YouTube](#)

Tuesday 25th January 2022


I can talk about something I was afraid of. A37 A54

What is penguin small
afraid of?



Tuesday 25th January 2022

I can talk about something I was afraid of. A37 A54



Have you ever been afraid of something?

How did you overcome your fear?

Were there any other emotions involved?

Tuesday 25th January 2022

I can talk about something I was afraid of. A37 A54

Share something that have have been afraid of.

How did you
overcome your fear?

Were there any
other emotions
involved?



Tuesday 25th January 2022

I can talk about something I was afraid of. A37 A54

Talk to an adult about something you have been afraid of.

Draw a picture and write sentences to describe how you were feeling and why.




MATHS

10:45 - 11:45

2 5. 1. 2 2

I can divide by 2. A36



Click on the link below to watch and learn.
Then complete the worksheet on the next
slide.



<https://vimeo.com/498260506>

1 Complete the sentences.

a) There are 12 cherries.

There are groups.

There are cherries in each group.

$$12 \div 2 = \square \quad 2 \times \square = 12$$



b)



There are 10 muffins.

There are muffins in each group.

There are groups.

$$10 \div 2 = \square \quad \square \times 2 = 10$$


2 Complete the number sentences for each array.

a)



$$\square \times 2 = 8$$

$$8 \div 2 = \square$$



$$\square \times 2 = 16$$

$$16 \div 2 = \square$$

3 There are 14 socks.



Amir puts them in pairs.

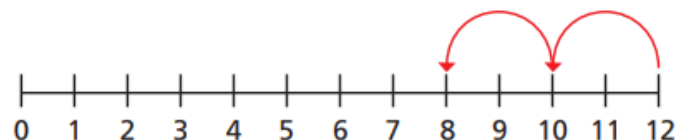
a) How many pairs of socks does he have?

b) Complete the number sentence.

$$\square \div \square = \square$$

4 Use the number lines to complete the division sentences.

a) $12 \div 2 = \square$



Divide by 2



$$\square \times 2 = 16$$

$$16 \div 2 = \square$$

- 3 There are 14 socks.



Amir puts them in pairs.

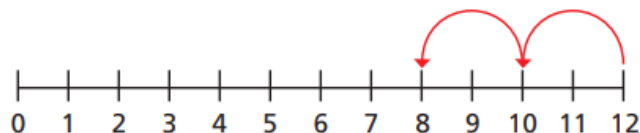
a) How many pairs of socks does he have?

b) Complete the number sentence.

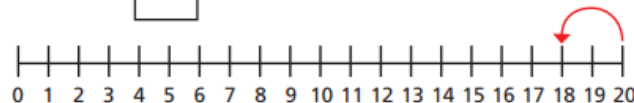
$$\square \div \square = \square$$

- 4 Use the number lines to complete the division sentences.

a) $12 \div 2 = \square$



b) $20 \div 2 = \square$



Is there another way to work this out?

- 5 Alex has 22 pencils.
She puts them into pots.
Each pot has 2 pencils.
How many pots does Alex need?



6



If I know my
2 times-table, I can use this
to help me divide by 2

Do you agree with Dora?
Talk about it with a partner.

- 7 Work out the divisions.

a) $6 \div 2$

d) $0 \div 2$

g) $\square \div 2 = 9$

b) $10 \div 2$

e) $\square \div 2 = 5$

h) $\square \div 2 = 11$

c) $14 \div 2$

f) $\square \div 2 = 6$

Handwriting

Tuesday 25th January 2022

u

u

u

u

25.1.22

I know about Australia.



Climate


Australia's seasons are the opposite to the seasons in the United Kingdom. When the UK is in winter, Australia is in their summer and when the UK is in summer, Australia is in their winter.



Mostly, summertime is very hot and dry. Summer lasts from December to March. People celebrate Christmas on the beach!



Climate
UK
Australia
physical
features
weather
seasons
temperature
mountains
coastline
desert
rainforest



Weather in Australia



The weather in Australia changes over the year. Australia has different seasons of weather.

In Australia, the four seasons are summer, autumn, winter and spring. The seasons are identified by the group of calendar months which they belong to.


In Summer (December, January and February), the weather is hot. Some parts of Australia are humid and other parts are dry.

In Autumn (March, April and May), the weather becomes cooler.

In Winter (June, July and August), the weather is cold and rain and storms are common. Some places in Australia get snow.

In Spring (September, October and November), the weather becomes warmer, however, it is still very mixed. There can be rain, wind and cool days.





Weather in the UK



The weather in the UK also follows a seasonal pattern, and it is similar to the weather pattern in some parts of Australia, but is opposite in the corresponding months.

The Winter (December, January and February) usually sees the coldest weather. It is cold, wet and windy and it sometimes snows. The average winter temperature is around 3 degrees Celsius and the average rainfall is about 5cm.

In Spring (March, April and May), the weather turns milder. It can still be wet and windy, especially in April. The average temperature is 11 degrees Celsius and the average rainfall is 5cm.

In Summer (June, July and August), the weather gets warmer. Average temperatures go up to around 19 degrees Celsius and the average rainfall is around 4.5 cm.

The Autumn (September, October and November) sees the weather turn colder and wetter. The average temperature is 13 degrees Celsius and the average rainfall is about 6cm.



Physical Features

Most of Australia is made up of desert, called the Outback.

Temperatures in the Outback range from as high as 50°C on summer days, to -10°C during winter nights.



Photo courtesy of Chris Pithell (@flickr.com) - granted under creative commons licence - attribution



Photo courtesy of Rob and Stephanie Levy (@wikimedia.org) - granted under creative commons licence - attribution

Australia also has rainforests.

The Daintree Rainforest is the oldest rainforest in the world. You can find more than 1200 types of insects here!

Physical Features



Photo courtesy of The 3B's (@flickr.com) - granted under creative commons licence - attribution

Australia is an island. It has coastline all around it and beautiful beaches.

The Murray River is the longest river in Australia. It is 1558 miles long!



Photo courtesy of Mettinbgn (@wikimedia.org) - granted under creative commons licence - attribution

The Australian Alps are Australia's largest mountain range.



Photo courtesy of CSIRO (@wikimedia.org) - granted under creative commons licence - attribution

25.1.22

I know about Australia.

How is Australia different to England?

Draw pictures to compare England and Australia.

Write sentences to compare using the key vocabulary.

Remember to use conjunctions such as *because, and, but, or, if, when, that.*

<u>England</u>	<u>Australia</u>



Climate
UK
Australia
physical
features
weather
seasons
temperature
mountains
coastline
desert
rainforest

25.1.22

I know about Australia.

What have you learned about Australia?

How does it compare to England?

What is similar and different?

