

Wednesday 19th January 2022



to Class Y2

Literacy




Wednesday 19th January 2022

I can understand poetry structure.

Listen to some of the poems used
in this book.

What can you tell me about the
way they are written?




Wednesday 19th January 2022

I can understand poetry structure.

When two rhyming couplets are used together, we call it a verse.

There was a gigantic whale,
With a swishy tail.
He swam and swam all day,
Until the sky was grey.




Wednesday 19th January 2022

I can understand poetry structure.

When two rhyming couplets are used together, we call it a verse.

At night he fell asleep,
As he sank into the _____.
When the morning came,
He woke and did the _____.




Wednesday 19th January 2022

I can understand poetry structure.

When two rhyming couplets are
used together, we call it a verse.

He found something to eat,
a tasty, juicy _____.

It gave him lots of power,
To swim for another _____.




Wednesday 19th January 2022

I can understand poetry structure.

What will you need to include?

- Four lines for a verse
- Tell a story
- Capital letters to start lines
- Full stop after line two and four
- Comma after line one and three
- Rhyming words at the end of two lines
- Lines of about the same length




Wednesday 19th January 2022


I can understand poetry structure.

Can you write a poem about an animal?

Base your poem on one or more
animals from the book.



MATHS



1 9. 0 1. 2 2

I know the 5 times tables.

Can you count in 5s? What do you notice?

1	2	3	4	5	6	7	8	9	10
11	12	13	14	15	16	17	18	19	20
21	22	23	24	25	26	27	28	29	30
31	32	33	34	35	36	37	38	39	40
41	42	43	44	45	46	47	48	49	50
51	52	53	54	55	56	57	58	59	60
61	62	63	64	65	66	67	68	69	70
71	72	73	74	75	76	77	78	79	80
81	82	83	84	85	86	87	88	89	90
91	92	93	94	95	96	97	98	99	100

Use the link
below to splat
number when
counting in 5s.



<https://www.topmarks.co.uk/learning-to-count/paint-the-squares>

19. 01. 22

I know the 5 times tables.

Using your knowledge of the 5 times tables
can you complete this number track?

5, 10, 15, __, 25, __, 35, __

30, 35, 40, __, __, __

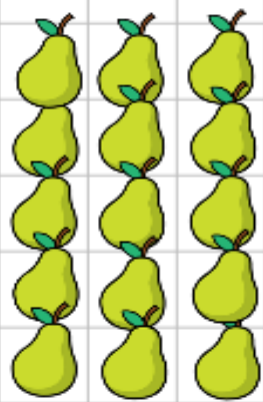
60, 55, 50, __, __, __

19. 01. 22

I know the 5 times tables.

Look at these arrays.

Which matching number sentences can you write?



19. 01. 22

I know the 5 times tables.

We can draw a picture as an array.



Which matching number sentences can you write?

19. 01. 22

I know the 5 times tables.

Look at these number sentences.
Can you find the missing numbers?

$$3 \times 5 =$$

$$5 \times 3 =$$

$$\underline{\quad} \times 5 = 15$$

$$15 = \underline{\quad} \times 5$$

$$5 \times 5 =$$

$$\underline{\quad} \times 5 = 10$$

$$20 = 5 \times \underline{\quad}$$

$$40 = \underline{\quad} \times 5$$

19.01.22

I know the 5 times tables.

Use this link to
find the video
presentation for
this lesson

<https://vimeo.com/490421314>



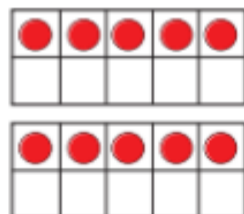
The 5 times-table



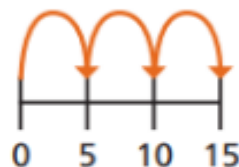
- 1 a) Match the picture to the times-table fact.



3×5



2×5




1×5

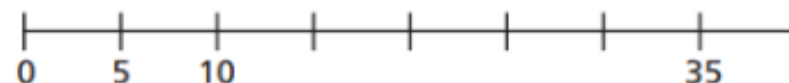


5×5

- b) Draw a picture to show 4×5



- 2 a) Complete the number line.



- b) Which times-table does the number line show?

Tick your answer.

1 times-table

2 times-table

5 times-table

How do you know?





3 Complete the number sentences.

a) $5 \times 5 =$

f) $= 11 \times 5$

b) $= 9 \times 5$

g) $5 \times$ $= 5$

c) $5 \times 6 =$

h) $5 \times 0 =$

d) $5 \times$ $= 40$

i) $10 = 5 \times$

e) $35 =$ $\times 5$

j) $\times 5 = 60$

4 How much money does Ron have?



Complete the multiplication.

\times $=$

Ron has p.

5 Write $<$, $>$ or $=$ to compare the calculations.

7×5 5×8

6×5 $4 \times 5 + 2 \times 5$

2×5 $3 \times 5 - 1 \times 5$

12×2 2×12

6 A sandwich costs £2 and a box of crayons costs £5



Jack buys 5 sandwiches and 3 boxes of crayons.
How much does he spend in total?

Jack spends £

Handwriting



Handwriting

Wednesday 19th January 2022

k

k

ki

ki

RE



19.01.22

I know where Sikhs worship.

Sikhs worship in a Gurdwara.



https://www.reonline.org.uk/specials/places-of-worship/sikhism_video.htm

Watch the video clip to find out more.

What are the features of a Gurdwara?



Sikhs worship at a gurdwara.

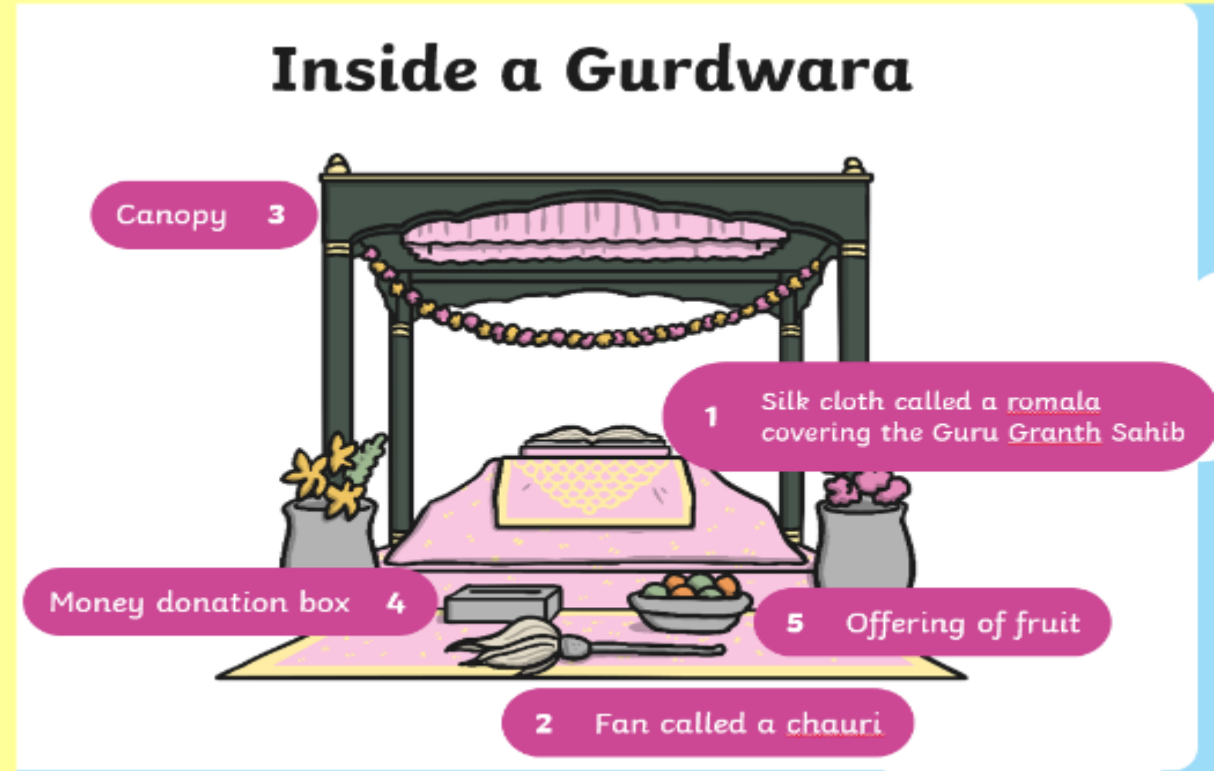
19.01.22

I know where Sikhs worship.



What would you see inside a Gurdwara?

What are these things for?




19.01.22

I know where Sikhs worship.

Draw a picture on one side of your paper of a Gurdwara.

On the other side draw and label the things you find inside a Gurdwara.



Sikhs worship at a gurdwara.

Inside a Gurdwara



Music



19.01.22

How music teaches us about the past.

Sparkle in the sun.



Copy the animals finding the pulse!



<https://walsallmusichub.charanga.com/c/1356466-model-music-curriculum/1356155-focus-on-dynamics-tempo/lessons/524044-sparkle-in-the-sun-part-1>