

Tuesday 18th January 2022

18.01.2022

Handwriting

Spellings:

foresight
forebear
forecast
forefinger
forearm

Word of the Day:

physical

Task:

Copy each word twice and then write it a third time without looking.

Make sure your joins are accurate, letters the same size and your handwriting sits neatly on the line.

Can you write a complex sentence?

Can you write a sentence with an expanded noun phrase?

Can you write a sentence with a verb opener?


Can you write a sentence with a relative clause?

Tuesday 18th January 2022

18.01.2022

I can compare two characters.

What can you tell me about these two characters?



Physical description

Vocabulary:
characters,
deduce,
infer,
physical,
personality,
description,
film,
cinematic,
invention.


Tuesday 18th January 2022

18.01.2022

I can compare two characters.

What can you tell me about their personalities from the images?

Vocabulary:
characters,
deduce,
infer,
physical,
personality,
description,
film,
cinematic,
invention.




Tuesday 18th January 2022

18.01.2022

I can compare two characters.

Let's pick one of the characters to describe.

Vocabulary:
characters,
deduce,
infer,
physical,
personality,
description,
film,
cinematic,
invention.



Tuesday 18th January 2022

18.01.2022

I can compare two characters.

Let's make some decisions about them.

What is their personality like?

How are they feeling?

Vocabulary:
characters,
deduce,
infer,
physical,
personality,
description,
film,
cinematic,
invention.

Tuesday 18th January 2022

18.01.2022

I can compare two characters.

Vocabulary:
characters,
deduce,
infer,
physical,
personality,
description,
film,
cinematic,
invention.

Task:

Reread the text from yesterday's lesson (Remote Learning - 17.01.2022).

Say how you think the two characters would react in these scenarios and explain your reasons:

a) the fire alarm goes off.

b) the young girl returns

18.01.22

I can multiply 3 digits by 2 digits

Flashback 4

Year 5 | Week 2 | Day 2



- 1) Work out 24×13
- 2) A bus carries 46 passengers.
There are 3 full buses.
How many passengers in total?
- 3) What is $150 \div 3$?
- 4) What is $1,500 \div 3$?

18.01.22

I can multiply 3 digits by 2 digits

<https://vimeo.com/488555095>

Watch the lesson above and complete the work on the following slides.

Reasoning:

Is the following statement true or false?

Can you use reasoning to explain your thinking?

$$647 \times 43 = 647 \times 3 + 647 \times 40$$

$204 \times 40 =$

(×)
(×)

- 5 Some children are asked to work out 308×19
- a) Which is the best estimate to use to check their answers?
- Circle your choice and work out the answer to your estimate.

300×10 300×20 310×20 300×19

estimate answer =

- b) Explain the reasons for your choice.
- c) Here are answers given by three children.

Nijah 28,028

Filip 5,852

Whitney 2,080

From your estimate, who do you think is correct? _____

- d) Work out the correct answer.

- e) What mistakes might the others have made?

- 6 A football pitch is 128 m long and 52 m wide.

- a) What is the area of the pitch?

- b) A field is 25,000 m².

How many football pitches could fit in it?

- 7 Write $>$, $<$ or $=$ to complete each statement.

a) 146×64 164×46

135×53 153×35

- b) What do you notice?
- Does this always happen?

- 8 Miss Rose is ordering some pencils.

She orders 17 of pack A, 14 of pack B and 4 of pack C.

Pack A



Pack B



Pack C



How many pencils does Miss Rose order?

Each pencil costs 16p.

How much does Miss Rose spend on pencils?

I can carry out basic first aid for bleeding

Starter Activity

Severe Bleeding

Use your current first aid knowledge to explain what you could do for each of the 5 steps below.

Step 1.


Step 2.

Step 3.

Step 4.

Step 5.

Number the images to show which step they belong to



I can carry out basic first aid for bleeding

Blood

Basic anatomy

- Blood is made up of different things and travels around inside of our body. It provides the body with a lot of important things we need to survive.
- The **H_ _ _ _** pumps blood around the body.
- Blood travels around the body inside of vessels which are all different sizes.

I can carry out basic first aid for bleeding

What do you think?

A **SIGN** is
something you
can see.

**Signs and symptoms
of someone bleeding
could be...**

A **SYMPTOM** is
something that
the casualty
can tell you
they are feeling.



I can carry out basic first aid for bleeding

Answers

Signs and symptoms of someone bleeding from an injury could be:

- Pain and blood at site of the injury
- Pale skin
- Feeling faint
- Rapid pulse or heart rate
- Distress and anxiety
- Bruising and swelling
- Lack of response

Question:

Would you call for help if you found someone with these signs and symptoms?

Explain your answer.

Tuesday 18th January 2022

18.01.2022

I can carry out basic first aid for bleeding

<https://youtu.be/kRrkE8A4cel>

Task:

☐ Describe how it might feel if someone was injured and bleeding

QUESTION:

☐ What should you do straight away if you found someone who is bleeding?

QUESTION:

☐ What could you wear (if it is possible) when dealing with someone who is bleeding? Why

Tuesday 18th January 2022

18.01.2022

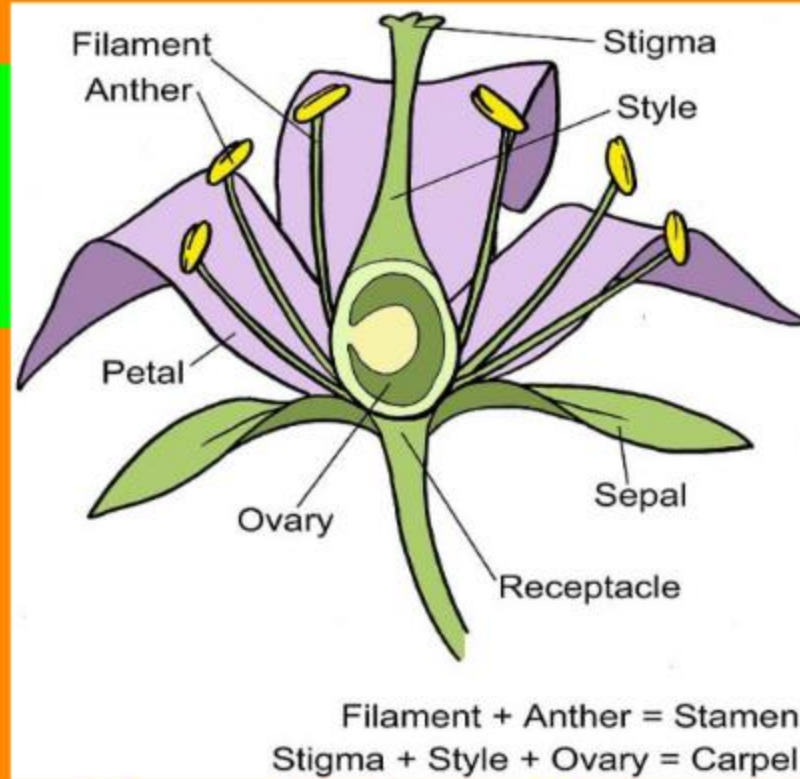
I can describe the process of reproduction in plants.

Tell me about the parts of a flower and their function.

How is a seed produced?

Why is a seed produced?

<https://www.bbc.co.uk/teach/class-clips-video/science-ks2--ks3-how-plants-and-animals-reproduce/zm8fbdm>



Vocabulary:
flower,
petals,
stamen,
anther,
pollen,
pollination,
filament,
carpel,
stigma,
style,
ovaries,
ovules,
fertilisation.

Tuesday 18th January 2022

18.01.2022

I can describe the process of reproduction in plants.

Let's take a look at how new plants were produced...

https://www.youtube.com/watch?v=kNRZE95am84&ab_channel=HarliG

spider plant

Vocabulary:
flower,
petals,
stamen,
anther,
pollen,
pollination,
filament,
carpel,
stigma,
style,
ovaries,
ovules,
fertilisation.

pollination
fertilisation

Tuesday 18th January 2022

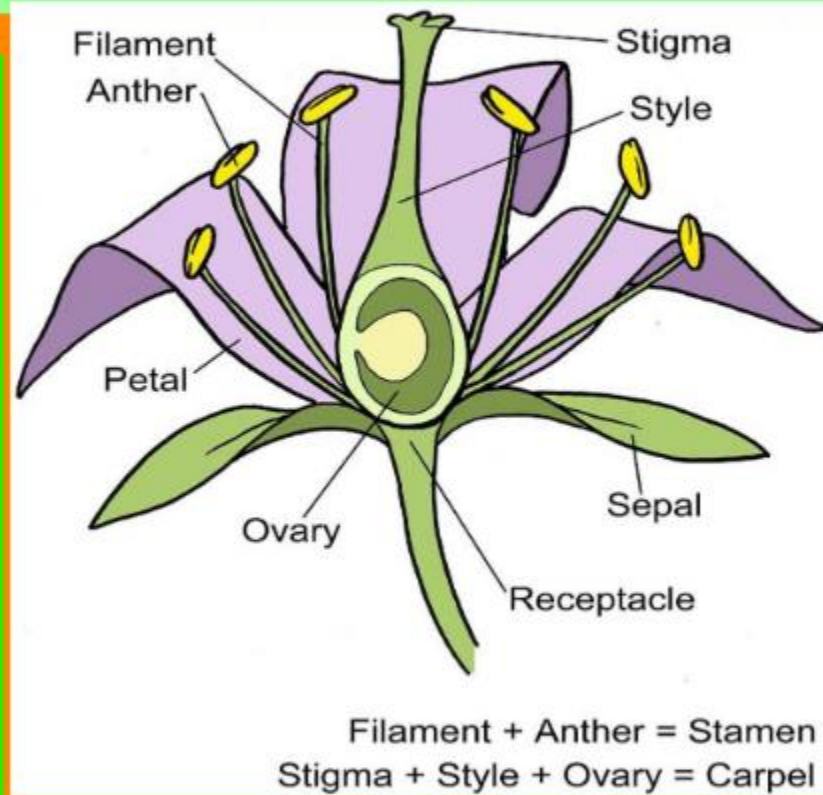
18.01.2022

I can describe the process of reproduction in plants.

Your task is to draw a diagram of a flower and label the parts.

Explain how a flower produces a seed.

Explain the way that the spider plant reproduced.



Vocabulary:
flower,
petals,
stamen,
anther,
pollen,
pollination,
filament,
carpel,
stigma,
style,
ovaries,
ovules,
fertilisation.