

Wednesday 12th January 2022



Year 2 Remote Learning


Literacy

9:00 – 10:15


Wednesday 12th January 2022

I can use different sentence starters. [A39](#)

What do you notice about these sentences?



- The tiger is orange and black.
- The fierce, stripy tiger is hunting.
- The wild tiger is hungrily eating his prey.
- The tiger has soft, stripy fur.
- The tiger quickly pounces out from the leafy bush.



Wednesday 12th January 2022


I can use different sentence starters.

Think about sentence openers. We don't want to repeat 'the tiger has ...' too much. **Finish these sentences.**

Covering his body...

Round, beady eyes...

When the tiger walk, he uses his ...




Wednesday 12th January 2022

I can use different sentence starters. [A39](#)

Write sentences about the tiger.

Try to complete the orange or red chilli.

Complete sentences using starters given on last slide.



Write sentences starting with a verb, adjective or conjunction.




Write sentences starting with a verb, adverb, adjective or conjunction.



Conjunctions

and
but
or
if
because
that



Wednesday 12th January 2022


I can use different sentence starters. [A39](#)

Read your sentences to check.



Did you use interesting sentence starters?

Can you spot noun phrases and conjunctions?



Can you spot some adverbs and verbs?

MATHS

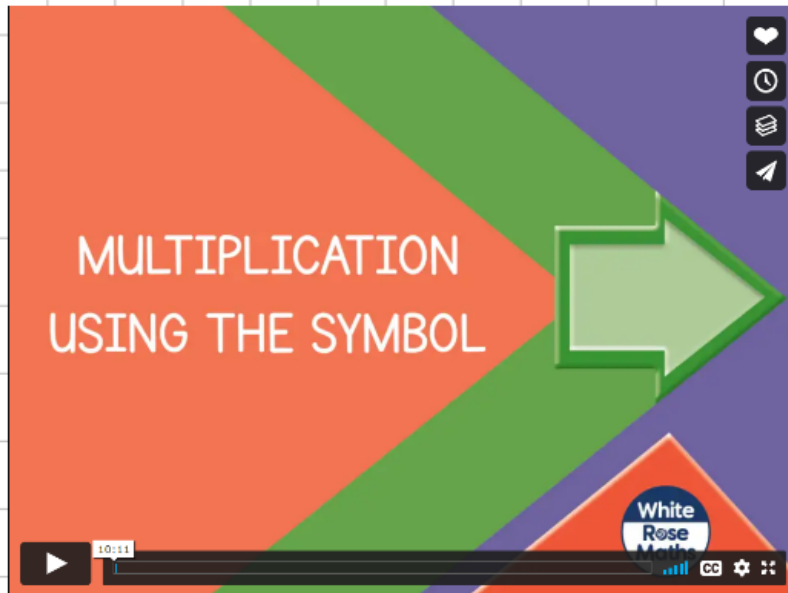
10:45 - 11:45

1.2.1.2.2

I can write multiplication sentences using the x symbol.



Click on the link below to watch and learn.

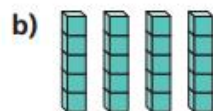
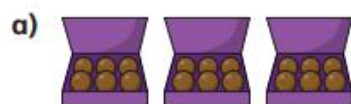


<https://vimeo.com/488111269>

- 1 Complete the sentence to describe each picture.

There are equal groups with in each group.

Write one addition and one multiplication sentence for each.



- 2 Complete the table.

The first one has been done for you.

Addition	Multiplication
$2 + 2 + 2 + 2$	4×2
$5 + 5 + 5$	
$3 + 3 + 3 + 3 + 3$	
	2×10

- 3 Complete the pattern.

$$5 \times 2 = 5 + 5 = \square$$

$$5 \times 3 = 5 + 5 + 5 = \square$$

$$5 \times 4 = 5 + 5 + 5 + 5 = \square$$

$$5 \times 5 = \underline{\hspace{2cm}} = \square$$

What comes next?

- 4 The total is 16

What could the addition and multiplication be?

- 5 Use counters to help you complete the number sentences.

a) $3 \times \square = 12$

c) $2 \times \square = 10$

b) $\square \times 4 = 8$

Handwriting

Wednesday 12th January 2022

c

c

c

ce

RE

2:00 - 2:30



12.1.22


I know that a church is a place of worship.

Who worships in a church?



Have you ever seen a church before?

Describe what it is like inside.



church



Christians

Bible



altar

red wine

bread



12.1.22

I know that a church is a place of worship.

Click on the link
below to see
explore inside.



Christians worship in a church.

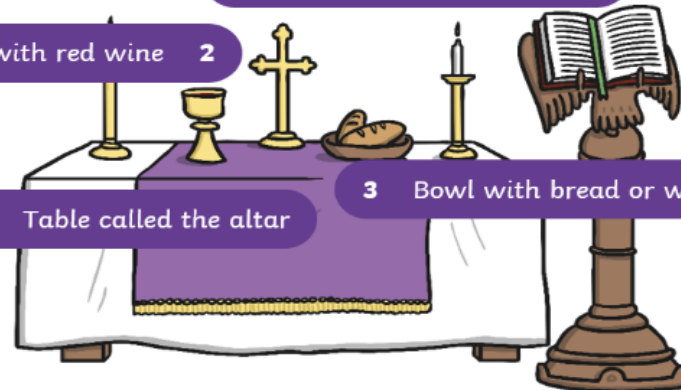
Inside a Church

Chalice cup with red wine

Holy book called the Bible

1 Table called the altar

3 Bowl with bread or wafers



[Places of Worship - Christianity - Anglican \(reonline.org.uk\)](http://reonline.org.uk)

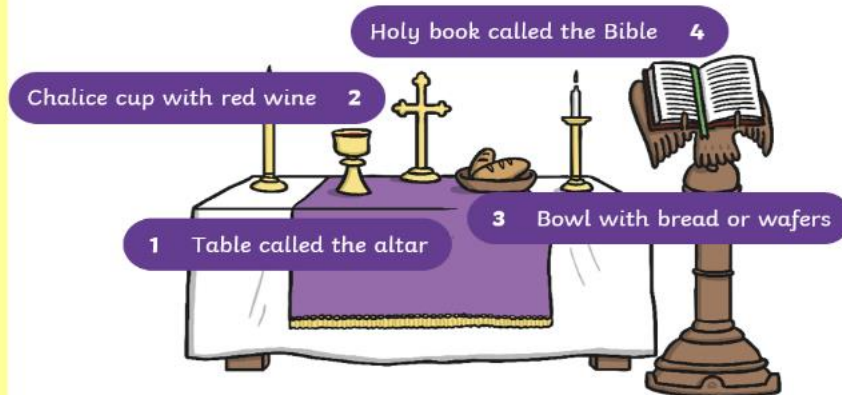
12.1.22

I know that a church is a place of worship.



Draw and label the inside of a church.

Inside a Church



church
Christians
Bible
altar
red wine
bread

