

A4 Tuesday 11th January 2022

A16 I can form my letters correctly.



Write your date and
learning objective.

Remember to form
letters correctly.

Tuesday 11th January 2022

I can form my letters correctly.



Lets look at how one
armed robot letters are
formed.


Look at your work from yesterday. Copy the letters.

Tuesday 11th January 2022

I can form my letters correctly.

Why is correct letter
formation important?


Do you remember what
kind of text this is?



Tuesday 11th January 2022

I can form my letters correctly.

What does a sentence need?





Tuesday 11th January 2022

I can form my letters correctly.

Correct the sentences.

the giraffe has a tall, long neck

it has short pointy ears

Tuesday 11th January 2022

I can form my letters correctly.

Look back at the noun phrases
you thought of yesterday.



Tuesday 11th January 2022

I can form my letters correctly.

Use the noun phrases to write sentences.



Tuesday 11th January 2022

I can form my letters correctly.

Extend your sentences using connectives.



1.1.1.2.2

MATHS

10:45 - 11:45

1 1. 1. 2 2

Key Word
count on

I can add by counting on

Count on 5 from 10.

Count on 7 from 8.

Count on 10 from 10.

1.1.1.2.2

Key Word
count on

I can add by counting on

Count on to find how many altogether.

4



Write the number sentence.

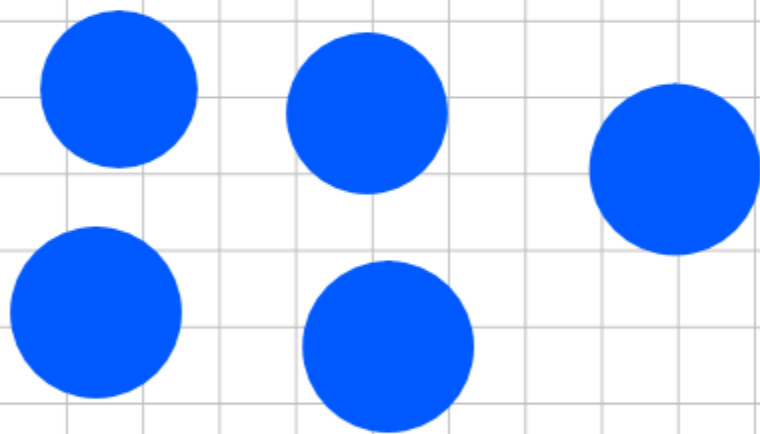
1.1.1.2.2

Key Word
count on

I can add by counting on

Count on to find how many altogether.

9



Write the number sentence.

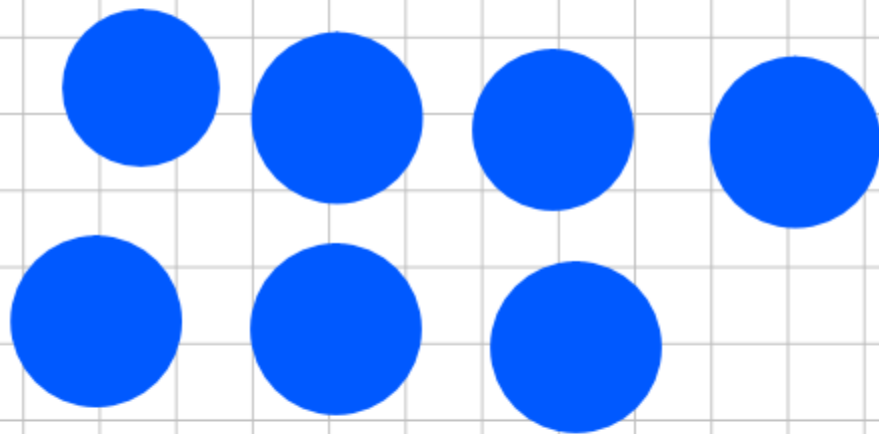
11.1.22

Key Word
count on

I can add by counting on

Count on to find how many altogether.

10



Write the number sentence.

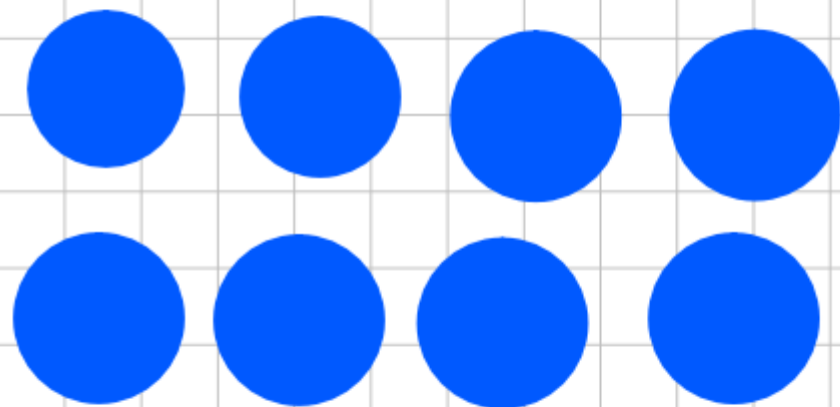
11.1.22

Key Word
count on

I can add by counting on

Count on to find how many altogether.

13



Write the number sentence.

1 1. 1. 2 2

Key Word
count on

I can add by counting on

Count on to find how many altogether.

17



Write the number sentence.

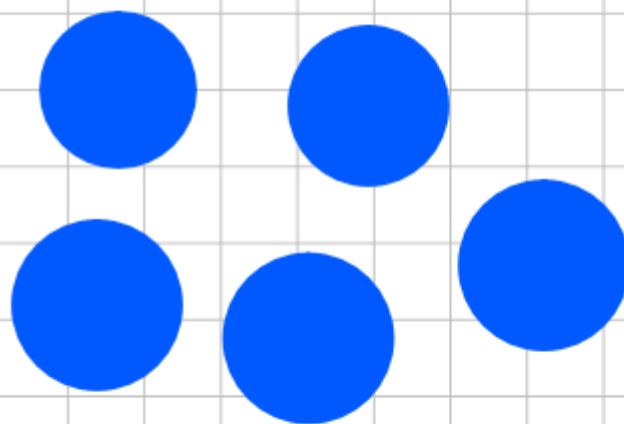
1.1.1.2.2

Key Word
count on

I can add by counting on

Count on to find how many altogether.

18




Write the number sentence.



Watch the Video
And complete the
worksheet

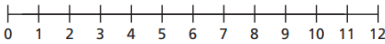
<https://vimeo.com/490879463>

1 There are 9 children on the bus.
5 more children get on the bus.



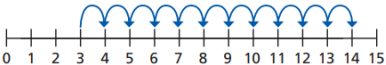
How many children are on the bus now?

2 Eva has 4 coins.
Jack gives her 7 more coins.
How many coins does Eva have now?

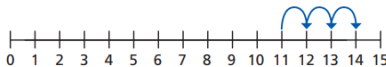


3 Ron and Mo are working out $3 + 11$ on a number line.

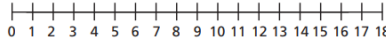
Ron's method



Mo's method



What is the same and what is different?
Use a number line to work out the additions.



a) $2 + 13$ b) $4 + 9$ c) $1 + 17$

Theme

1:30-2:00



11.1.21

I can show I understand the past

What does 'past' mean?

11.1.21

I can show I understand the past

Look at these two images.
Can you see differences between the past and present?



11.1.21

I can show I understand the past

Look at these two images.
Can you see differences between the past and present?



What is a timeline?



Can we create our own timeline?


A timeline for the days of the week



A timeline of years



Let's look at making a timeline of our life.



Make a timeline of your life.