

Monday 10th January 2022

HANDWRITING

programme
competition
according
criticise
attached

WORD OF
THE DAY:
passer-by

Write each word 3 times
in your handwriting book
followed by a sentence
which uses the word.

Monday 10th January 2022

Literacy

I can investigate the features of a newspaper.

What is the purpose of a newspaper?

Who has read one before?

Monday 10th January 2022

I can investigate the features of a newspaper.

What has been in the news recently?

How do you find out about current events?

Who do you know that reads a newspaper?

What would you expect from a newspaper report?

Vocabulary:

headline,
overview,
columns,
past tense,
quotes,
conclusion,
exaggeration.

Monday 10th January 2022

I can investigate the features of a newspaper.

Take a look at the two examples of newspaper reports.

What do they have in common in their layout?

Can you find examples of these questions being answered in each text:

- What?
- When?
- Who?
- Where?



South Korea's Sensational Opening Ceremony

Millions of viewers tune in to watch the greatest show on the planet.

Last night, the 2018 Winter Olympics kicked off in style with a two-hour long opening ceremony held at the Olympic stadium in Pyeongchang. Hundreds of performers honoured South Korean culture and history, followed by a parade of athletes from over 90 nations who will compete in various winter sports over the next few weeks. This major sporting event, which takes place every four years, is an international tradition that first began in 1924.



The 2018 Winter Olympic torch relay began in Greece back in October 2017. It then covered 2,000km of South Korea before reaching Pyeongchang for the opening ceremony.

The evening commenced with the lighting of the stadium's Olympic cauldron, which will remain lit until the closing ceremony on Sunday 25th February. Next, the story of South Korea's history was presented through music and dance, showcasing wonderful costumes and special effects. There were further performances which shared the same theme of 'peace', sending out a strong message to the world.

The 59-strong Team GB arrived in South Korea some time ago. In a recent interview, Lizzy Yarnold, who won skeleton gold in 2014, said that she was on great form and ready to defend her title. She was joined in the Team GB parade by figure skaters Penny Coomes and Nick Buckland and sibling curlers Glen, Thomas and

Eve Muirhead. Short track speed skater Elise Christie was also present after her disappointing disqualification in 2014, having been believed to have caused a crash. When interviewed, she defended her actions by stating, "You are going at 35mph and you've got to make a decision in less than a second. My sport is unpredictable and that's why I love it."

Following the event, one of the 35,000 spectators said, "Absolutely unforgettable! The atmosphere was electric!" When asked about the cold weather, one British spectator commented, "It was a very cold night, but the ceremony warmed my heart." Team USA combatted the freezing temperatures by wearing heated parkas during their parade into the stadium.



Winter Olympian, Lizzy Yarnold, competing in the skeleton event.

Hopes are high that this will be Team GB's most successful Winter Olympics yet, enabling them to break their four-medal record. With British athletes also competing in bobsleigh, luge, biathlon, alpine skiing, cross-country skiing, freestyle skiing and snowboarding, can they do it? Watch this space.

by Dave Perry

THE HOBBITON HERALD

www.hobbiton-herald.com THE SHIRE'S FAVOURITE NEWSPAPER 6 pennies

BAGGINS IS BACK!

SURPRISE RETURN OF HOBBIT THOUGHT DEAD

By Andwise 'Andy' Roper

The quiet village of Hobbiton-on-the-Water was yesterday in uproar due to the unexpected re-appearance of Mr Bilbo Baggins, who left the Shire months ago, accompanied by the wizard Gandalf. Where has he been all this time?

A large crowd of Hobbits had gathered at Mr Baggins' home, Bag End, where his property was being sold off by his cousins, Mr and Mrs Sackville. They had asked some months ago for Mr Baggins to be declared dead and had subsequently claimed Bag End as their own inheritance.

Having demonstrated that he was very definitely alive, Mr Baggins demanded that everyone should leave his house. Mrs Sackville was heard to say, "It's outrageous! How can we be sure he's not an imposter?" However, Mr Baggins has told his story exclusively to the *Hobbiton Herald*.

Bilbo Baggins, Gandalf and a party of dwarves (led by Thorin Oakenshield) departed some time ago on a quest to recover lost treasure, stolen centuries before by the fearsome dragon Smaug, hundreds of miles away beyond the Misty Mountains. Their journey through foreign territories was perilous and Bilbo claims that their lives were endangered many times.



Bilbo Baggins

Early on, they were captured by trolls; they only avoided being eaten because Gandalf tricked the creatures and turned them to stone. While sheltering from a violent storm in the Misty Mountains, they were trapped again – this time by hordes of vicious, evil goblins. Bilbo explained they had got away because Gandalf killed the Great Goblin with magic.

Lost and alone underground, Bilbo next met a strange creature called Gollum, who agreed to help if the hobbit could answer a series of riddles. Unfortunately, this individual betrayed Bilbo's trust. Mr Baggins wouldn't detail how he managed to escape – he is strangely reluctant to discuss this particular event...

In Mirkwood, the adventurers unwisely strayed from the path and consequently were imprisoned again. Quick-thinking Bilbo saved them from years in the dungeons: "I made everyone climb into barrels and we floated down the river," he explained.

When they finally reached their destination – the Lonely Mountain – they found a scene of such desolation that the dwarves were initially unable to find the way into their family home. Bilbo saved the day. He not only located the entrance but also devised how to kill the dragon. Following Smaug's death, they were attacked by the goblins and their allies. Although the evil creatures were defeated, Thorin was unfortunately killed.

Grateful for all his help, the dwarves rewarded Bilbo with treasure and he set off home with Gandalf. After a less eventful journey back, he arrived in Hobbiton only to find everyone thought he was dead!

Now that Mr Baggins has recovered from his epic adventure, he says he has asked the police to make the Sackvilles hand back his property. He will be staying at Bag End for the foreseeable future: "No more adventures for me!" said Bilbo, grinning.



The Lonely Mountain

	The Sporting News	Baggins is Back
What?		
Who?		
When?		
Where?		
Why?		

Features

The name of the newspaper

A headline that uses a pun, rhyme or alliteration

A subtitle which gives a bit more information about what the report is about

The reporter's name

An introductory paragraph containing the 5 Ws (what, where, when, who, why)

Information about the main events presented in chronological order

Pictures with captions

Written in the third person and in the past tense

Direct and reported speech

Formal language

Rhetorical Questions

A conclusion paragraph to explain what might happen next

YOUR TASKS:

For both articles, find the answers to these questions: what? when? where? and who?

Explain what these two newspaper articles have in common. Can you explain how they are different to narrative writing?

Year 6 Maths

Week 2 – Decimals

Lesson 1 – I can understand decimals up to 3 decimal places.

Videos to support the task can be found here:

<https://vimeo.com/487196408>

The worksheet for the lesson can be found below.

Three decimal places

- 1 Use place value counters to make the numbers.
Draw your answers.

a) 1.343

T	O	Tth	Hth	Thth

b) 16.052

T	O	Tth	Hth	Thth

c) 7.001

T	O	Tth	Hth	Thth

d) 70.01

T	O	Tth	Hth	Thth



- 2 Complete the sentences.

O	Tth	Hth	Thth
● ● ● ● ●	● ● ● ● ●	● ● ● ● ●	● ● ● ● ●

There are ones.

There are tenths.

There are hundredths.

There are thousandths.

The number in digits is

- 3 Write the value of the 3 in each number.

a) 3.65 _____

b) 0.093 _____

c) 18.31 _____

d) 72.439 _____

e) 32.701 _____

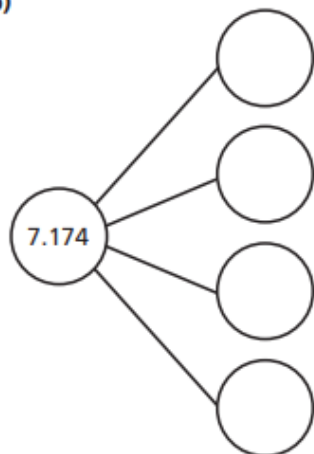
f) 19.03 _____

4 Complete the part-whole models.

a)



b)



5 Complete the number sentences.

a) $17.134 = 10 + 7 + 0.1 + \boxed{} + 0.004$

b) $94.077 = 90 + 4 + 0.07 + \boxed{}$

c) $\boxed{} = 30 + 4 + 0.07 + 0.009$

6 Complete the number sentences.

$1.456 = 1 + 0.4 + \boxed{} + 0.006$

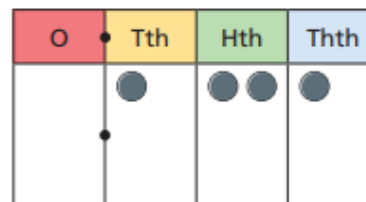
$1.456 = 1 + 0.3 + \boxed{} + 0.006$

$1.456 = 1 + 0.2 + \boxed{} + 0.006$

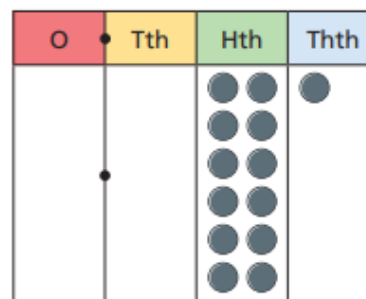
$1.456 = 1 + \boxed{} + 0.006$

7 Mo and Annie have represented 0.121 on their place value charts.

Mo's chart



Annie's chart



Mo

Only my grid shows 0.121



Annie

Both our grids show 0.121

Who do you agree with? _____

Explain why.

Monday 10th January 2022

Computing

I can use Microsoft Word to create an information document.

Activity: Research on what Mexico is like now and gather information and pictures to show this.

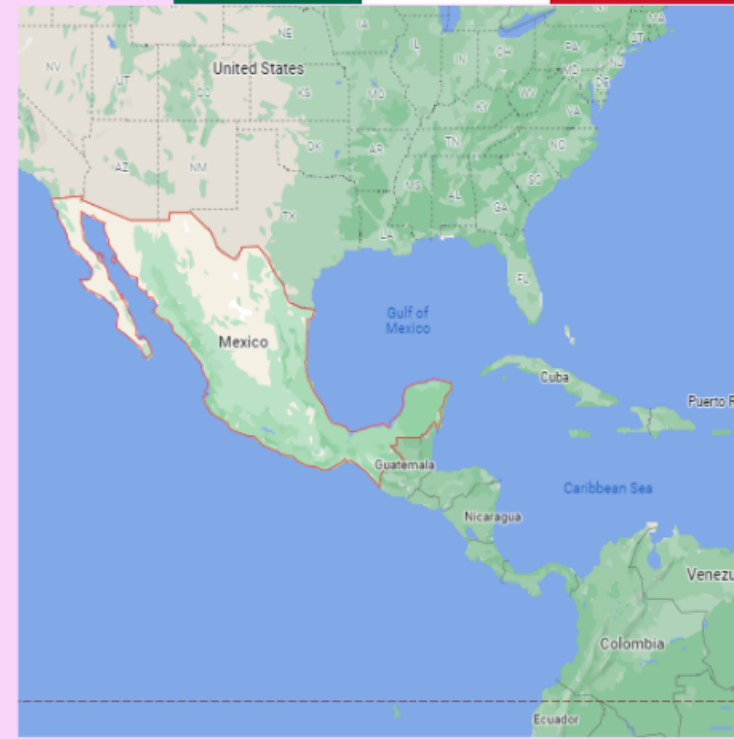
<https://www.kids-world-travel-guide.com/mexico-facts.html>



Skills you will learn,

- Copy and paste
- Find reliable information
- Change font and size
- Taking notes from online sources

Challenge: Change the font and colour.
Can you include a table?



Monday 10th January 2022

Spanish

I can say my name, age and birthday in Spanish.

<https://classroom.thenational.academy/lessons/saying-your-name-age-and-birthday-in-spanish-6cu62c>